

KERALA PUBLIC SCHOOLS
ACADEMIC YEAR 2021-22
HOME ASSIGNMENT WITH WEB LINK



CLASS : UKG

DATE : 04.01. 2022– 5.02.2022

SUBJECT	CHAPTERS	ASSIGNMENT	REFERENCES
ENGLISH	Ch-11: “OO” LIKE COOL 4.01.22 5.01.22 6.01.22	<p style="text-align: center;"><u>Complete the work in your English Notebook</u></p> <p>1.) Draw the pictures of pool, door, tooth and broom and complete the exercises .</p> <p>I. Word bank: cool , pool floor, broom ,tooth food ,door ,good ,school, sick, took good, tool, food,</p> <p>II.Fill in the blanks:</p> <p>1.Tom had a really cool <u>pool</u>.</p> <p>2.Tom did not want to go to <u>school</u>.</p> <p>3. Mom took Tom to a <u>doctor</u>.</p> <p>4. Tom played with the <u>broom</u>.</p> <p>5. Tom <u>sat</u> on the floor.</p> <p>III.Underline the correct answer the correct answer: (pg109)</p> <p>1. Who is the main character in this story? A. <u>Tom</u> B. Rob C. Mom D. a doctor</p> <p>2. Where did Tom sit? A. <u>floor</u> B door C. mat D. pool</p> <p>3. Which of these OO sound words is not in this story? A. <u>igloo</u> B. tools C. soon D. room</p>	

7.01.22

IV. Answer the following (pg 110)

1. What did Tom open?

Ans. Tom opened the door.

2. Where did Tom sit?

Ans. Tom sat on the floor.

3. What did Tom do with the broom ?

Ans. Tom played with the broom.

4. Where did mother take Tom?

Ans. Mom took him to the doctor.

8.01.22

Make Sentences

1. play – **I play with toys.**

2. room- **I keep my room clean.**

3. dirty- **Do not make the floor dirty.**

4. school- **I love my school.**

Rhyming words

tool- **pool , fool**

took - **look , cook**

ate- **gate, late**

10.01.22
Ch13: Know
Your Time

Draw picture of a clock and complete the exercises.

I. Word bank:

Morning, teeth ,hungry ,sleepy, dinner
night ,brush ,time, eat, bed, breakfast .

11.01.22

II.Tick the correct answer:

1.What time do you wake up?

A. **7am** B. 8am C. 11am D. 6pm

2. What time do you have lunch?

A. 7am B. 8 pm **C. 1 pm** D. 2 pm

3.What time do you take a nap?

A. 7 am B.8am C. 11 am **D. 2 pm**

4. When do you have dinner?

A. 4am B. 5 pm C. **8 pm** D. 7 pm

5.What time do you go to bed?

A. 7 am B.8pm **C. 9 pm** D. 10pm

12.01.22

III.Answer the following:

1.When do you wake up?

Ans I wake up at 6 am.

2.When do you go to school?

Ans. I go to school at 8 am.

3.When do you come back from school?

Ans. I come back from school at 11am.

Make Sentences

13.01.22&
14.01.22

1.morning- **I wake up in the morning.**

2.hungry- **My brother is hungry.**

3.dinner – **We have dinner at night.**

Rhyming words

nap – lap , tap

bed- fed,wed

eat– meat , seat

17.01.22

LEARN AND WRITE THE COMPOSITION IN YOUR NOTEBOOK :

MY MOTHER(pg 135)

The name of my mother is _____.

She is very beautiful.

She cooks healthy and tasty food for me..

She helps me in my studies.

I love my mother.

18.01.22

**USE OF
IS/AM/ARE**

Solve the exercise given in page 112 in the English Reader.

1. This is a cup.
2. I am eating.
3. They are playing.
4. Simran is reading.
5. We are singing.
6. I am wearing a blue dress.
7. Bob is wearing a yellow shirt.

<https://youtu.be/watch?v=xl2kZhPgyOw&feature=share>

<https://youtu.be/3jYey47uwxg>

<https://youtu.be/FZ-ZjRaSrFY>

19.01.22

Read the sentences and put in is, am or are.

1. I _____ a girl.
2. We _____ in the truck.
3. It _____ a big dog.
4. They _____ playing in the park.
5. He _____ reading a book.
6. You _____ tall and thin.
7. I _____ a farmer.
8. The girl _____ sleepy.
9. The children _____ riding their bikes.
10. The cows _____ black and white.

Ans. 1.am 2. are 3. is 4. are 5. is 6. are 7. am
8. is 9. are 10. are

20.01.22

Use am/is/are

1. You _____ beautiful.
2. Tim and Tina _____ married.
3. It _____ rainy.
4. I _____ Kevin.
5. He _____ happy.
6. I _____ late.
7. It _____ cold.
8. She _____ a journalist.
9. We _____ in the school.
10. She _____ taller than me.

Ans. 1. are 2. are 3. is 4. am 5. is,
6. am, 7. is, 8. is, 9. are, 10. is

21.01.22

Put in am, is or are in the sentences below.

1. We _____ scared.



2. He _____ in the garden.



3. I _____ drawing shapes.



4. They _____ riding their bikes.



5. She _____ a nurse.



22.01.22

6. You _____ a smart boy.



7. I _____ sleepy.



8. The girls _____ hungry.



9. Tom and I _____ scientist.



10. It _____ sad.











Ans 1.are 2.is 3.am 4.are 5.is
6. are 7. am 8.are 9. are 10.is











One / Many

24.01.22
USE OF
ONE/MANY

Q.1 Change the following words from one to many:

One	Many
1. Cap 	 _____
2. Top 	 _____
3. Pin 	 _____
4. Egg 	 _____

Q2. Match the following :

One	Many
	
	
	
	
	

27.01.22

Complete the table.

One	Many
Cap	caps
Flower	flowers
Room	rooms
Apple	apples
River	rivers
Bird	birds
Umbrella	umbrellas
Brother	brothers
Banana	bananas
Toy	toys

One/ Many

28.01.22



Ans. flower – flowers

egg- eggs

car- cars

star- stars

hut- huts

31.01.21

MY PET (pg 136)

I have a pet dog.

The name of my dog is _____.













It has four legs and a tail..

It likes to eat meat and bones.

My pet dog wags its tail when it sees me.

1.02.22 to
4.02.22
REVISION OF
ALL TOPICS.

Identify He or She

 he she	 he she	 he she
he  she	he  she	he  she
 he she	 he she	 he she
 he she	 he she	 he she

Write the opposite words

good x _____

come x _____

day x _____

sit x _____

opened x _____

Use He/ She

1.  _____ is my mum.

2.  _____ is my brother.

3.  _____ is my granddad.

4.  _____ is my sister.

5.  _____ is my granny.

6.  _____ is my dad.

Make Sentences

1.school-

2.play –

3.night-

4.hungry-

5. door –

Answer the following.


- 1. Where did Tom sit ?**
- 2. When do you wake up?**
- 3. Where did mother take Tom?**

MATHS


4/01/22
TIME
Pg.no:-152

TIME

Solve the given exercises in your Maths book.




5/01/22
Pg.no -153




<https://youtube.com/watch?v=Z5oDdCWHWcs&feature=share>

<https://youtube.com/watch?v=Kj-tZ5sRf3M&feature=share>

6/01/22
Pg.no -154



7/01/22
Pg.no -155



8/01/22
Notebook work

NOTEBOOK WORK

Activity:-

Draw or stick picture of **Clock** in your maths notebook.

Fill in the blanks.

1. I wake up at **6:00**am every morning.
2. I go to school at **8:00**am.
3. It is sunny during the **day** time.
4. We see the moon at **night** time.
5. I eat lunch at **12 O'**clock in the noon.

Tick the correct option.

a. I go to school in the




b. I sleep at

10/01/22

11/01/22




Textbook work Subtraction (Take away)




Look at pictures and complete the subtraction statement.

12/01/22



Count and write.



Subtraction
13/01/22
Pg.no-160

14/01/22

Pg.no-161

Subtracting Zero

Subtracting Zero
What happens when you do not take away anything?

$4 - 0 = 4$ $1 - 0 = 1$
 $3 - 0 = \square$ $11 - 0 = \square$

Subtracting the same number
What happens if you take away everything?

$4 - 4 = 0$
 $1 - 1 = \square$

Teacher's Tip
Hold five pencils in your hand and distribute them among the children. Tell them that now you have zero pencils. Explain to the children that when we give away everything, the answer is always zero. Similarly, hold five pencils in your hand and don't give away anything. Tell the children that you haven't given away anything, so the number of pencils remain the same.

Cross out the correct number.

17/01/22

Pg.no-162

Subtraction
Cross out (X) the correct number. How many are left? Write the answer. The first one has been done for you.

$6 - 2 = 4$ $5 - 3 = \square$
 $5 - 1 = \square$ $4 - 0 = \square$
 $8 - 4 = \square$ $7 - 3 = \square$
 $4 - 3 = \square$ $4 - 4 = \square$

Teacher's Tip
Concept: Understanding simple problems on subtraction.
Introduction: Give the children six objects. Count the objects and write the number down. Then take away three objects. Write -3 after the previous number. So now you have $6-3$. Read this out as 6 take away 3 and ask the children how many are left. Write the answer after an '=' sign. Now read the entire thing out loud as 6 take away 3 is equal to 3.

Write the answer.

18/01/22

Pg.no-163

Subtraction
Write the answer.

$3 - 1 = \square$ $7 - 3 = \square$
 $3 - 3 = \square$ $4 - 1 = \square$
 $6 - 4 = \square$ $4 - 0 = \square$
 $5 - 3 = \square$ $7 - 6 = \square$

Answers;- 2 , 4 , 0 , 3, 2, 4, 2 , 1
Subtraction.


19/01/22
Pg.no-164



ANSWERS:- 5 , 5 , 2 , 2 , 0 , 5 , 3 , 1

20/01/22
Pg.no-165

Vertical subtraction.




ANSWERS:- 4 , 4 , 7 , 5 , 1 , 0 , 2 , 4 , 5 , 6 , 0 , 3

21/01/22
Pg.no-166

NOTEBOOK WORK

Picture Subtraction.

 $2 - 1 = \square$

 $3 - 1 = \square$

 $3 - 2 = \square$

 $4 - 3 = \square$

 $5 - 3 = \square$




 $4 - 3 = \square$




ANSWERS:- 1 , 2 , 1 , 1 , 2 , 1




22/01/22
Pg.no-167

Count and write.

below and write the subtraction equation below it.

	-		=	
_____	-	_____	=	_____

	-		=	
_____	-	_____	=	_____

	-		=	
_____	-	_____	=	_____

24/01/22

1) $\begin{array}{r} 6 \\ - 2 \\ \hline \end{array}$	4) $\begin{array}{r} 5 \\ - 2 \\ \hline \end{array}$	7) $\begin{array}{r} 8 \\ - 2 \\ \hline \end{array}$	10) $\begin{array}{r} 7 \\ - 3 \\ \hline \end{array}$
2) $\begin{array}{r} 4 \\ - 3 \\ \hline \end{array}$	5) $\begin{array}{r} 6 \\ - 3 \\ \hline \end{array}$	8) $\begin{array}{r} 4 \\ - 1 \\ \hline \end{array}$	11) $\begin{array}{r} 4 \\ - 2 \\ \hline \end{array}$
3) $\begin{array}{r} 2 \\ - 1 \\ \hline \end{array}$	6) $\begin{array}{r} 3 \\ - 2 \\ \hline \end{array}$	9) $\begin{array}{r} 6 \\ - 5 \\ \hline \end{array}$	12) $\begin{array}{r} 1 \\ - 1 \\ \hline \end{array}$

25/01/22



Subtraction

ANSWERS: - 4, 3, 6, 4, 1, 3, 3, 2, 1, 1, 0



Subtracting story way.

Word Problems



1) Mary has 6 cherries. She eats 2 of them. How many cherries are left?

	=	
$\begin{array}{ c } \hline 6 \\ \hline \end{array}$ - $\begin{array}{ c } \hline \\ \hline \end{array}$	=	$\begin{array}{ c } \hline \\ \hline \end{array}$

2) There are 8 orange slices in a plate. Pam eats 3 of them. How many orange slices are there in the plate now?

	=	
$\begin{array}{ c } \hline 8 \\ \hline \end{array}$ - $\begin{array}{ c } \hline \\ \hline \end{array}$	=	$\begin{array}{ c } \hline \\ \hline \end{array}$

3) Tina has 5 candies. She gave 4 of them to Rosy. How many candies are left with Tina?

	=	
$\begin{array}{ c } \hline 5 \\ \hline \end{array}$ - $\begin{array}{ c } \hline \\ \hline \end{array}$	=	$\begin{array}{ c } \hline \\ \hline \end{array}$

ANSWERS :- 4, 5, 1

27/01/22

Subtraction

$$10 - 5 = 5$$

$$10 - 3 = 7$$

$$10 - 2 = 8$$

$$10 - 6 = 4$$

$$10 - 8 = 2$$

Subtracting Zero

$$4 - 0 = 4$$

$$6 - 0 = 6$$

$$2 - 0 = 2$$

28/01/22

$$10 - 0 = 10$$

$$5 - 0 = 5$$

31/01/22

Write number names.

23 _____

34 _____

16 _____

30 _____

45 _____

What comes after and before?

_____ 56 _____ _____ 67 _____

_____ 78 _____ _____ 37 _____

_____ 98 _____ _____ 86 _____

What comes in between?

1/02/22 to
04/02/22
Revision of all
possible
exercises to be
done.

45 ____ 47 59 ____ 61

13 ____ 15 76 ____ 78

89 ____ 90 27 ____ 29

PUT < > OR =

56 ____ 76 60 ____ 54

36 ____ 27 39 ____ 67

23 ____ 23 70 ____ 90

Complete the lines .

45 _____

66 _____

Count in 5's and 2's and fill in the missing numbers.

5 _____

25 _____

4 _____

16 _____

I.Name the shapes.









II.Draw two objects that are circle in shape.



ADDITION

5 + 4 =

$7 + 3 =$

$4 + 4 =$

$4 + 3 =$

$8 + 2 =$

Answer key to the revision work.

Number names

twentythree

thirtyfour

sixteen

thirty

fortyfive

What comes after and before?

54,57 66,68

77,79 36,38

97,99 85,87

What comes between?

46,60,14,77,90,28

Put $<$ or $=$

$<$, $>$, $>$, $<$, $=$, $<$

Complete the lines

46,47,48,49

67,68,69,70

Count in 5's and 2's

10,15,20,25

30,35,40,45

6,8,10,12

18,20,22,24

Name the shapes.

oval square

triangle circle

Addition

9

10

8

7

10

G.AW

SEASONS
Book pg no.
46&47
04.01.21 to
08.01.21



Q1. Name a few seasons?

Ans. Summer , Winter, Autumn, Monsoon, and Spring.

Q2. In which Season do we sit near the fire place?

Ans. In winter season, we sit near the fire place.

Q3. What do you like to drink on a hot day?

Ans. We like to drink juice and cold drink on a hot day.

Q4. In which season the leaves fall from the trees?

Ans. During the autumn season the leaves fall from the trees.

Q5. During which season the flowers bloom?

Ans. In spring season the flowers bloom.

Q6. In which season the nights are longer than days?

Ans. In winter season the nights are longer than days.

Q7. In which season the days are longer than the nights?

Ans. During summer season the days are longer than the nights.


<https://youtu.be/qeJOfsxPYPk>

<https://youtu.be/watch?v=D5GTzVWvcPU&feature=share>

<https://youtu.be/watch?v=mnKFEqw-MkE&feature=share>

<https://youtu.be/watch?v=y5dH1SexY5E&feature=share>

10.01.21 to
14.01.21
NATIONAL
SYMBOLS



Q1. What is our National Flag called?

Ans. Our National Flag is called Tiranga or Tricolour.

Q2. What are the colours of our National Flag?

Ans. Saffron, White and Green are the colours of our National Flag.

Q3. Which is our National Anthem?


Ans. Jana- Gana- Mana is our National Anthem.

Q4. Which is our National Emblem?

Ans. Lion Capital is our National Emblem.

Q5. Which is our National Fruit?

Ans. Mango is our National Fruit.



Q1. How many days are there in a week?Name them.

Ans. There are seven days in a week.

Sunday, Monday, Tuesday, Wednesday, Thursday, Friday and Saturday.

Q2. Which day is a holiday?

Ans. Sunday is a holiday.

Q3. Which day comes after Thursday?

Ans. Friday comes after Thursday.

Q4. Which day is the first day of the week?

Ans. Monday is the first day of the week.

**17.01.21 to
22.01.21
DAYS OF THE
WEEK Book
page no. 52**



24.01.21 to
31.01.21
**MONTHS OF
THE YEAR**
Book page no.
53

Q1. How many months are there in a year?

Ans. There are twelve months in a year.

Q2. Which is the first month of the year?

Ans. January is the first month of the year.

Q3. Which is the last month of the year?

Ans. December is the last month of the year.

Q4. In which month we celebrate Independence Day?

Ans. We celebrate Independence Day in August.

Q5. In which month we celebrate Republic Day?

Ans. We celebrate Republic Day in January.


Q 6. Name the months which start with the letter 'J'.

Ans. January, June and July start with the letter 'J'.


The revision work to be done based on the topics given above.

HINDI

रेखा द्वारा चित्रों को उनके पहले अक्षर से मिलाइए

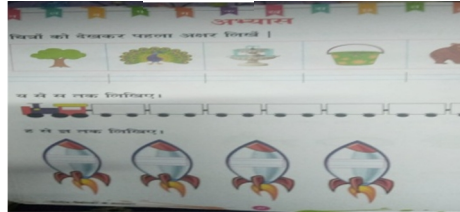


चित्रोंको देखकर पहला अक्षर लिखें



01.02.22 to
04.02.22

य से स तक लिखिये



के से ज तक लिखिए ।

पेज नंबर 49,50

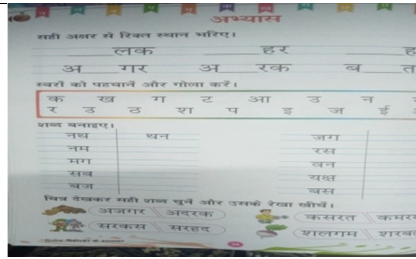
शब्दों में ध्वनि की क्रमानुसार पहचान
पेज नंबर 51,52,53,54,55,56

HINDI


04.01.22 to
14.01.22
अभ्यासकार्य

पेज नंबर 59

सही अक्षर से रिक्त स्थान भरिए ।




पेज नंबर 60
तीरों से जुड़े अक्षरों को मिलाकर शब्द बनाइए।



पेज नंबर 61
आओपढ़े


पेज नंबर 62
शब्दों को सही लाइन में लिखें।

पेज नंबर सही अक्षर से रिक्त स्थान भरिए।




17.01.22 to
31.01.22
अभ्यासकार्य

पेज नंबर 64
पढ़ें वाक्य हाँ लिखें



पेज नंबर 65

गिने एवं रंग भरे।



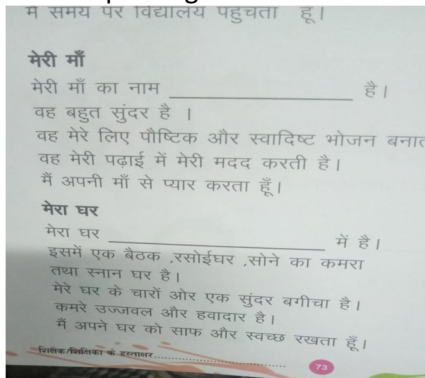
पेज नंबर 66

प्रत्येक आकृतिको गिनकर सही अंकों को गोल करें।



पेज नंबर 67,68,69,70

Public speaking



Revision of all possible exercises to be done.

1.02.22 to
04.02.22

DIRECTOR ACADEMICS