

KERALA PUBLIC SCHOOLS
ACADEMIC SESSION: 2020-21
HOME ASSIGNMENT



CLASS: U.kg

DATE: 27.1 to 15.2.2021

Subject	Topic / Date	Assignment	References
<u>ENGLISH</u>	(CH-“oo” like cool) <u>27.1.2021</u>	I. Word bank: 1. Cool 2. Pool 3. Floor 4. Broom 5. Tooth 6. Food 7. door 8. good 9. school	
	28.1.2021	II.Fill in the blanks: 1.Tom had a really cool -----. 2.Tom did not want to go to -----	
	29.1.2021	III.Tick the correct answer: 1.Which of these “oo” sound word not in the story? (igloo, tools, soon) 2.Who wanted to play in his pool? (Tom, Sara) 3.Where did Tom sit? (floor, pool, mat)	
	1.2.2021	IV.Answer the following: 1. What did Tom open? 2. What did Tom do with the Broom? 3.Where did mother take Tom?	
	2.2.2021	V.Make sentences: 1. play: 2. room:	

	<p>CH-13 (Know your time) 5.2.2021</p> <p>8.2.2021</p> <p>12.2.2021</p> <p>15.2.2021 (IS/AM/ARE)</p> <p>28.1.2021 (CH- "oo" like cool)</p> <p>29.1.2021</p>	<p>I. Word bank:</p> <ol style="list-style-type: none"> 1.morning 2.teeth 3.hungry 4.sleepy 5.dinner 6.night 7.brush 8.breakfast <p>II.Tick the correct answer:</p> <ol style="list-style-type: none"> 1.What time do you wake up? (7am, 8am, 11am) 2.What time do you take a nap? (8am, 2pm, 11am) 3.What time do you go to bed? (8pm, 10pm, 9pm) <p>III.Answer the following:</p> <ol style="list-style-type: none"> 1.When do you wake up? 2.When do you go to school? 3.When do you come back from School? <p>I. Fill in the blanks with (am/is/are):</p> <ol style="list-style-type: none"> 1. He ----- my brother. 2. They ----- playing. 3. Bob ----- wearing a blue shirt. 4. I ----- eating. <p style="text-align: center;">Answer key:</p> <p>II.Fill in the blanks:</p> <ol style="list-style-type: none"> 1. pool 2. school <p>III.Tick the correct answer:</p> <ol style="list-style-type: none"> 1. Tom 2. Floor 	
--	---	---	--

	<p>1.2.2021</p>	<p>IV. Answer the following:</p> <ol style="list-style-type: none"> 1. Tom opened the door. 2. Tom played with the broom. 3. Mother took Tom to the doctor. 	
	<p>5.2.2021</p>	<p>V. Make sentences:</p> <ol style="list-style-type: none"> 1. I like to play football. 2. My room is clean. 	
	<p>(CH-Know your time) 8.2.2021</p>	<p>I. Tick the correct answer:</p> <ol style="list-style-type: none"> 1. 7am 2. 2pm 3. 9pm 	
	<p>12.2.2021</p>	<p>II. Answer the following:</p> <ol style="list-style-type: none"> 1. I wake up at 7am. 2. I go to school at 8am. 3. I come back from school at 11am. 	
	<p>15.2.2021 (IS/AM/ARE)</p>	<p>I. Fill in the blanks with (is/am/are):</p> <ol style="list-style-type: none"> 1. Is 2. Are 3. Is 4. am 	







KERALA PUBLIC SCHOOLS
ACADEMIC SESSION: 2020-21
HOME ASSIGNMENT



CLASS: U.kg

DATE: 27.1 to 15.2.2021

SUBJECT	TOPIC / DATE	ASSIGNMENT	REFERENCE
HINDI	स्वर वर्ण 27/01/21 28.1.21	<p>सभी कार्यो को साफ और सुंदर ढंग से अपनी कार्य- पुस्तिका में करें। सही अक्षरों पर घेरा लगायें-</p> <p>अ - अ आ अ ऋ आ - अ आ अ अ इ - इ इ इ इ ई - अ ई ई ई उ - उ उ उ उ ऊ - इ ऊ ऊ ऊ</p> <p>जोड़कर लिखें - अ + ब = अब अ + ज + ग + र = अजगर आ + म = आम आ + द + र = आदर इ + ध + र = इधर ई + द = ईद उ + द + य = उदय ऊ + प + र = ऊपर</p>	

	<p>29/01/21</p> <p>1/02/21</p>	<p>खाली जगह भरें –</p> <p>अ<u>स</u>र आ<u>ग</u> आ<u>ल</u>स इ<u>ध</u>र ई<u>ख</u> अद<u>र</u>क उप<u>व</u>न ऊ<u>प</u>र</p> <p>पहला अक्षर लिखें –</p> <div style="display: flex; justify-content: space-around; align-items: center;"> <div style="text-align: center;">  <p>आ</p>     </div> <div style="text-align: center;"> <p>अ</p>  <p>आ</p> <p>अ</p> <p>अ</p> <p>अ</p> </div> </div>	
--	--------------------------------	--	--

5/02/21

खाली जगह भरें -

ऋ ण

ए क

एक ट क

ऐ न क

ओ स

औ र

औ ष ध

अं ग

पहला अक्षर लिखें -

8.02.21



ऋ



ए



ऐ









ओ



औ



अं

	<p>9.02.21</p>	<p>वाक्य बनायें – एक - एक आम चखा ऐनक – ऐनक पहना ओम – ओम कहा औषध – औषध चखा और – आम और ईख चखा अंक – अंक पढ़ा</p> <p>अ आ इ ई उ ऊ ऋ ए ऐ ओ औ अं अः वर्णों का लिखित अभ्यास अपनी कार्य पुस्तिका में करें।</p> <p>चित्रों के नाम लिखें।</p>	
	<p>10.02.21</p>	<p> अदरक</p> <p> आम</p>	
	<p>11.02.21</p>	<p> ईख</p> <p> ऊन</p>	
		<p> एक</p>	
		<p> ऐनक</p>	
		<p>१ – १० तक हिन्दी के अंकों का अभ्यास अपनी कार्य पुस्तिका में करें। १ २ ३ ४ ५ ६ ७ ८ ९ १०</p> <p>गिनकर अंक लिखें –</p>	

		<p>□ □ २</p> <p>□ □ □ □ ४</p> <p>□ □ □ □ □ ५</p> <p>♥ □ ♥ □ ♥ □ ♥ □ ♥ □ ♥ □ ♥ □ ७</p> <p>□ □ □ □ □ □ □ □ ८</p> <p>□ □ □ □ □ □ □ □ □ □ ९</p>	
	12.02.21		
	15.02.21		

KERALA PUBLIC SCHOOLS
ACADEMIC SESSION: 2020-21
HOME ASSIGNMENT



CLASS: U.kg
DATE: 27.1 to 15.2.2021

SUBJECT	CHAPTERS	ASSIGNMENT	REFERENCE																														
MATHS	Unit 9- Numbers 1 to 50 27.1.2021	<p>Write the number name of following numerals:</p> <p>i) 13 – ii) 19 – iii) 24 – iv) 28 – v) 31 – vi) 36 – vii) 43 – viii) 47 – ix) 49 – x) 50 –</p>																															
	28.1.2021	<p>Count backward and complete the series:</p> <table border="1" style="margin-left: auto; margin-right: auto; border-collapse: collapse;"> <tr> <td style="width: 20px; text-align: center;">30</td> <td style="width: 20px;"></td> <td style="width: 20px;"></td> <td style="width: 20px;"></td> <td style="width: 20px; text-align: center;">26</td> <td style="width: 20px;"></td> <td style="width: 20px;"></td> <td style="width: 20px;"></td> <td style="width: 20px;"></td> <td style="width: 20px;"></td> </tr> <tr> <td style="text-align: center;">20</td> <td></td> <td></td> <td></td> <td></td> <td style="text-align: center;">15</td> <td></td> <td></td> <td></td> <td></td> </tr> <tr> <td></td> <td></td> <td style="text-align: center;">8</td> <td></td> <td></td> <td></td> <td></td> <td></td> <td></td> <td style="text-align: center;">1</td> </tr> </table>	30				26						20					15							8							1	
	30				26																												
	20					15																											
		8							1																								
29.1.2021	<p>Circle the bigger no.</p> <p>a) 9 3 b) 2 5 c) 6 8 d) 7 4</p> <p>Cross the smaller no.</p> <p>a) 6 4 b) 3 7 c) 5 2 d) 6 8</p>																																
1.2.2021	<p>Write the numerals:</p> <table border="1" style="margin-left: auto; margin-right: auto; border-collapse: collapse;"> <tr> <td style="width: 150px; padding: 5px;">4 and 1 more =</td> <td style="width: 150px; padding: 5px;">1 less than 18 =</td> </tr> </table>	4 and 1 more =	1 less than 18 =																														
4 and 1 more =	1 less than 18 =																																

12 and 1 more =

1 less than 22 =

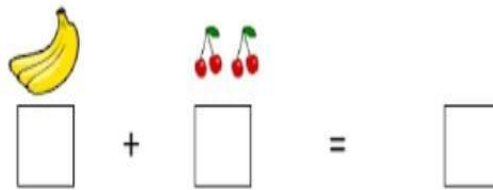
47 and 1 more =

1 less than 35 =

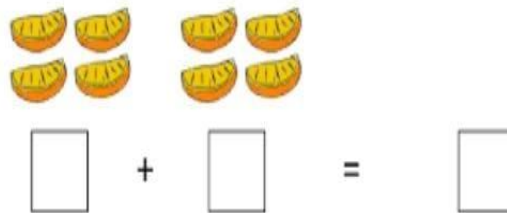
Addition
2.2.2021

Adding the Story Way :

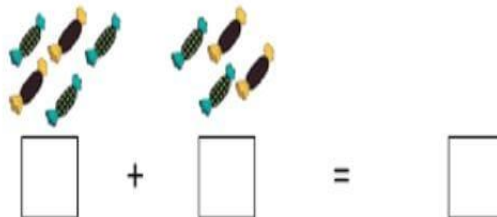
- 1) Mary has 3 bananas and 4 cherries. How many fruits does she have in all?



- 2) There are 4 orange slices in a plate. Pam adds 4 more. How many orange slices are there in the plate now?



- 3) Tina has 5 candies. Rosy has 4 candies. How many candies they have in all?



3.2.2021

Vertical Addition :

$$\begin{array}{r} 4 \\ + 1 \\ \hline \square \end{array}$$

$$\begin{array}{r} 2 \\ + 4 \\ \hline \square \end{array}$$

$$\begin{array}{r} 5 \\ + 1 \\ \hline \square \end{array}$$

$$\begin{array}{r} 6 \\ + 3 \\ \hline \square \end{array}$$

$$\begin{array}{r} 7 \\ + 2 \\ \hline \square \end{array}$$

$$\begin{array}{r} 5 \\ + 4 \\ \hline \square \end{array}$$



$$\begin{array}{r} 2 \\ + 6 \\ \hline \square \end{array}$$



$$\begin{array}{r} 4 \\ + 3 \\ \hline \square \end{array}$$



$$\begin{array}{r} 6 \\ + 1 \\ \hline \square \end{array}$$


4.2.2021

Picture Addition :


 $+$

 $=$


 $+$

 $=$


 $+$

 $=$


 $+$

 $=$


 $+$

 $=$

5.2.2021

Horizontal Addition:

Subtraction
8.2.2021

$5 + 3 = \square$

$3 + 4 = \square$

$4 + 2 = \square$

$6 + 3 = \square$

$7 + 0 = \square$

$5 + 5 = \square$

$2 + 6 = \square$

$8 + 2 = \square$

$9 + 1 = \square$

$4 + 4 = \square$

Subtrating the story way:

- 1) There were 7 birds sitting on a tree. 3 of them fly away. How many birds are left on the tree?



birds

- 2) John had 9 coins. He gave 4 of them to his younger sister. How many coins does John have now?



coins




- 3) Joe has 8 balloons. 3 of them burst. How many balloons left?









balloons

9.2.2021

Picture Subtraction:

  = 
____ - ____ = ____

  = 
____ - ____ = ____

  = 
____ - ____ = ____

10.2.2021

Vertical Subtraction:

1)
$$\begin{array}{r} 6 \\ - 2 \\ \hline \end{array}$$

2)
$$\begin{array}{r} 4 \\ - 3 \\ \hline \end{array}$$

3)
$$\begin{array}{r} 2 \\ - 1 \\ \hline \end{array}$$

4)
$$\begin{array}{r} 5 \\ - 2 \\ \hline \end{array}$$

5)
$$\begin{array}{r} 6 \\ - 3 \\ \hline \end{array}$$

6)
$$\begin{array}{r} 3 \\ - 2 \\ \hline \end{array}$$

7)
$$\begin{array}{r} 8 \\ - 2 \\ \hline \end{array}$$

8)
$$\begin{array}{r} 4 \\ - 1 \\ \hline \end{array}$$


9)
$$\begin{array}{r} 6 \\ - 5 \\ \hline \end{array}$$

11.2.2021
&

12.2.2021

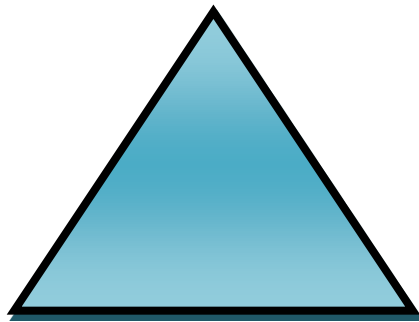
Draw and Write the following shapes in your note book

CIRCLE




A circle has no sides and no corners.

TRIANGLE



A triangle has three sides and three corners.

SQUARE



A square has four corners and


four equal sides.

RECTANGLE



A rectangle has four sides and four corners. It's opposite sides are equal.

OVAL




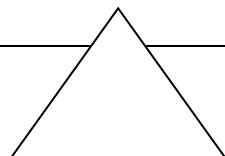
Oval has no sides and no corners.

15.2.2021

Name the Shapes:

1.





2.


3.



4.



5.



ANSWER KEY

SUBJECT	CHAPTERS	ASSIGNMENT	REFERENCE																														
MATHS	Unit 9- Numbers 1 to 50 27.1.2021 28.1.2021	<p>Write the number name of following numerals:</p> <p>xi) 13 – thirteen xii) 19 – nineteen xiii) 24 – twenty-four xiv) 28 – twenty-eight xv) 31 – thirty-one xvi) 36 – thirty-six xvii) 43 – forty-three xviii) 47 – forty-seven xix) 49 – forty-nine xx) 50 – fifty</p> <p>Count backward and complete the series:</p> <table border="1" data-bbox="422 1780 1107 1888"> <tr><td>30</td><td>29</td><td>28</td><td>27</td><td>26</td><td>25</td><td>24</td><td>23</td><td>22</td><td>21</td></tr> <tr><td>20</td><td>19</td><td>18</td><td>17</td><td>16</td><td>15</td><td>14</td><td>13</td><td>12</td><td>11</td></tr> <tr><td>10</td><td>9</td><td>8</td><td>7</td><td>6</td><td>5</td><td>4</td><td>3</td><td>2</td><td>1</td></tr> </table> <p>Circle the bigger no.</p>	30	29	28	27	26	25	24	23	22	21	20	19	18	17	16	15	14	13	12	11	10	9	8	7	6	5	4	3	2	1	
30	29	28	27	26	25	24	23	22	21																								
20	19	18	17	16	15	14	13	12	11																								
10	9	8	7	6	5	4	3	2	1																								



29.1.2021

- e) 9 3
f) 2 5
g) 6 8
h) 7 4

Circle the smaller no.

- e) 6 4
f) 3 7
g) 5 2
h) 6 8

Write the numerals:



4 and 1 more = 5	1 less than 18 = 17
12 and 1 more = 13	1 less than 22 = 21
47 and 1 more = 48	1 less than 35 = 34

1.2.2021



Addition
2.2.2021

Adding the Story Way :



- 1) Mary has 3 bananas and 4 cherries. How many fruits does she have in all?

 +  = $\boxed{3} + \boxed{4} = \boxed{7}$

- 2) There are 4 orange slices in a plate. Pam adds 4 more. How many orange slices are there in the plate now?

 +  = $\boxed{4} + \boxed{4} = \boxed{8}$

- 3) Tina has 5 candies. Rosy has 4 candies. How many candies they have in all?

 +  = $\boxed{5} + \boxed{4} = \boxed{9}$

Vertical Addition :

3.2.2021

$$\begin{array}{r} 4 \\ + 1 \\ \hline \end{array}$$

5

$$\begin{array}{r} 2 \\ + 4 \\ \hline \end{array}$$

6

$$\begin{array}{r} 5 \\ + 1 \\ \hline \end{array}$$

6

$$\begin{array}{r} 6 \\ + 3 \\ \hline \end{array}$$

9

$$\begin{array}{r} 7 \\ + 2 \\ \hline \end{array}$$

9

$$\begin{array}{r} 5 \\ + 4 \\ \hline \end{array}$$

9

$$\begin{array}{r} 2 \\ + 6 \\ \hline \end{array}$$

9

$$\begin{array}{r} 4 \\ + 3 \\ \hline \end{array}$$

7

$$\begin{array}{r} 6 \\ + 1 \\ \hline \end{array}$$

7

Picture Addition :

4.2.2021



3

+



6

=

9



3

+



5

=

8



2

+



7

=

9



5

+



5

=

10



3

+



5

=

8

Horizontal Addition:

5.2.2021

$5 + 3 = \boxed{8}$

$3 + 4 = \boxed{7}$

$4 + 2 = \boxed{6}$

$6 + 3 = \boxed{9}$

$7 + 0 = \boxed{7}$

$5 + 5 = \boxed{10}$

$2 + 6 = \boxed{8}$

$8 + 2 = \boxed{10}$

$9 + 1 = \boxed{10}$

$4 + 4 = \boxed{8}$

Subtrating the story way:

Subtraction
8.2.2021

- 1) There were 7 birds sitting on a tree. 3 of them fly away. How many birds are left on the tree?



birds

$7 - 3 = 4$

- 2) John had 9 coins. He gave 4 of them to his younger sister. How many coins does John have now?



coins

$9 - 4 = 5$

- 3) Joe has 8 balloons. 3 of them burst. How many balloons left?



balloons

$8 - 3 = 5$

9.2.2021

Picture Subtraction:

6 $-$ 2 $=$ 4

4 $-$ 1 $=$ 3

5 $-$ 3 $=$ 2

10.2.2021

Vertical Subtraction:

1) $\begin{array}{r} 6 \\ - 2 \\ \hline 4 \end{array}$

2) $\begin{array}{r} 4 \\ - 3 \\ \hline 1 \end{array}$

3) $\begin{array}{r} 2 \\ - 1 \\ \hline 1 \end{array}$

4) $\begin{array}{r} 5 \\ - 2 \\ \hline 3 \end{array}$

5) $\begin{array}{r} 6 \\ - 3 \\ \hline 3 \end{array}$

6) $\begin{array}{r} 3 \\ - 2 \\ \hline 1 \end{array}$

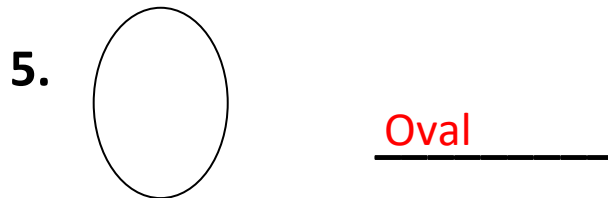
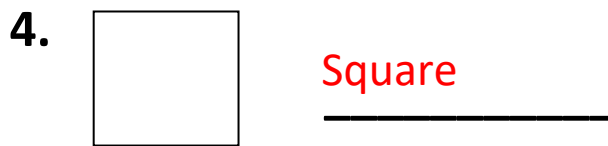
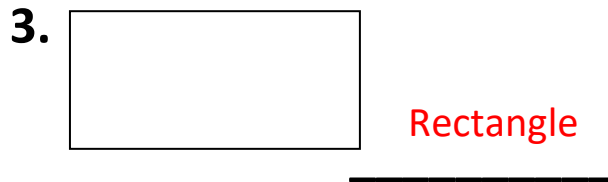
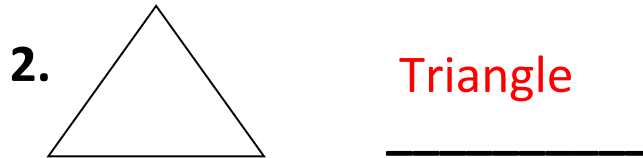
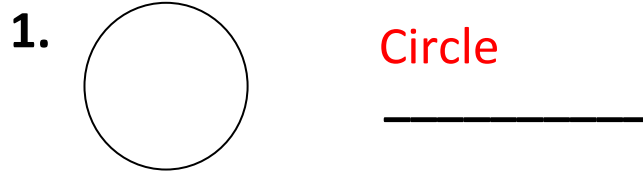
7) $\begin{array}{r} 8 \\ - 2 \\ \hline 6 \end{array}$

8) $\begin{array}{r} 4 \\ - 1 \\ \hline 3 \end{array}$

9) $\begin{array}{r} 6 \\ - 5 \\ \hline 1 \end{array}$

15.2.2021

Name the Shapes:



G. A

(27.1.2021
to
15.2.2021)

1. Road
Transport

2. People
who help us

3. Water
Transport

4. Air
Transport

**Practice the question and
answers orally.**