

**KERALA PUBLIC SCHOOLS  
ACADEMIC YEAR 2020-21  
HOME ASSIGNMENT WITH WEB LINK**



**CLASS : I**  
**DATE : 02.11.2020 to 28.11.20**

SUBJECT	CHAPTERS	ASSIGNMENT	REFERENCE																																																		
Mathematics	Ch-1 Addition and Subtraction 02.11.2020	<p><b>*The assignments given below have to be done in the Mathematics notebook.</b></p> <p><b>1. Add the numbers :-</b></p> <table style="margin-left: auto; margin-right: auto;"> <tr> <td style="text-align: center;">22</td> <td style="text-align: center;">55</td> <td style="text-align: center;">12</td> <td style="text-align: center;">12</td> <td style="text-align: center;">71</td> </tr> <tr> <td style="text-align: center;">+ 5</td> <td style="text-align: center;">+ 4</td> <td style="text-align: center;">+ 2</td> <td style="text-align: center;">+ 1</td> <td style="text-align: center;">+ 3</td> </tr> </table> <table style="margin-left: auto; margin-right: auto;"> <tr> <td style="text-align: center;">73</td> <td style="text-align: center;">53</td> <td style="text-align: center;">71</td> <td style="text-align: center;">56</td> <td style="text-align: center;">61</td> </tr> <tr> <td style="text-align: center;">+ 5</td> <td style="text-align: center;">+ 4</td> <td style="text-align: center;">+ 1</td> <td style="text-align: center;">+ 2</td> <td style="text-align: center;">+ 7</td> </tr> </table> <p><u>Answers:-</u></p> <table style="margin-left: auto; margin-right: auto;"> <tr> <td style="text-align: center;">22</td> <td style="text-align: center;">55</td> <td style="text-align: center;">12</td> <td style="text-align: center;">12</td> <td style="text-align: center;">71</td> </tr> <tr> <td style="text-align: center;">+ 5</td> <td style="text-align: center;">+ 4</td> <td style="text-align: center;">+ 2</td> <td style="text-align: center;">+ 1</td> <td style="text-align: center;">+ 3</td> </tr> <tr> <td style="text-align: center; color: green;">27</td> <td style="text-align: center; color: green;">59</td> <td style="text-align: center; color: green;">14</td> <td style="text-align: center; color: green;">13</td> <td style="text-align: center; color: green;">74</td> </tr> </table> <table style="margin-left: auto; margin-right: auto;"> <tr> <td style="text-align: center;">73</td> <td style="text-align: center;">53</td> <td style="text-align: center;">71</td> <td style="text-align: center;">56</td> <td style="text-align: center;">61</td> </tr> <tr> <td style="text-align: center;">+ 5</td> <td style="text-align: center;">+ 4</td> <td style="text-align: center;">+ 1</td> <td style="text-align: center;">+ 2</td> <td style="text-align: center;">+ 7</td> </tr> <tr> <td style="text-align: center; color: green;">78</td> <td style="text-align: center; color: green;">57</td> <td style="text-align: center; color: green;">72</td> <td style="text-align: center; color: green;">58</td> <td style="text-align: center; color: green;">68</td> </tr> </table>	22	55	12	12	71	+ 5	+ 4	+ 2	+ 1	+ 3	73	53	71	56	61	+ 5	+ 4	+ 1	+ 2	+ 7	22	55	12	12	71	+ 5	+ 4	+ 2	+ 1	+ 3	27	59	14	13	74	73	53	71	56	61	+ 5	+ 4	+ 1	+ 2	+ 7	78	57	72	58	68	<p><a href="https://youtu.be/v9J3VuI8_y0">https://youtu.be/v9J3VuI8_y0</a></p>
	22	55	12	12	71																																																
+ 5	+ 4	+ 2	+ 1	+ 3																																																	
73	53	71	56	61																																																	
+ 5	+ 4	+ 1	+ 2	+ 7																																																	
22	55	12	12	71																																																	
+ 5	+ 4	+ 2	+ 1	+ 3																																																	
27	59	14	13	74																																																	
73	53	71	56	61																																																	
+ 5	+ 4	+ 1	+ 2	+ 7																																																	
78	57	72	58	68																																																	
	03.11.2020	<p><b>2. Add the numbers and match:-</b></p>	<p><a href="https://www.mathsisfun.com/definitions/addition.html">https://www.mathsisfun.com/definitions/addition.html</a></p>																																																		

$15 + 4$	$12$
$5 + 7$	$19$
$8 + 6$	$17$
$14 + 3$	$14$
<hr/>	
$17 + 3$	$13$
$6 + 9$	$20$
$11 + 2$	$9$
$6 + 3$	$15$

Answers:-

$15 + 4$	$12$
$5 + 7$	$19$
$8 + 6$	$17$
$14 + 3$	$14$
<hr/>	
$17 + 3$	$13$
$6 + 9$	$20$
$11 + 2$	$9$
$6 + 3$	$15$

<https://www.youtube.com/watch?v=J6L5H3Nfe5s>

04.11.2020

3. Add the numbers:-

$$\begin{array}{r} 1) \quad 34 \\ + 23 \\ \hline \end{array}$$

$$\begin{array}{r} 7) \quad 51 \\ + 26 \\ \hline \end{array}$$

$$\begin{array}{r} 2) \quad 43 \\ + 6 \\ \hline \end{array}$$

$$\begin{array}{r} 8) \quad 27 \\ + 41 \\ \hline \end{array}$$

$$\begin{array}{r} 3) \quad 73 \\ + 6 \\ \hline \end{array}$$

$$\begin{array}{r} 9) \quad 52 \\ + 34 \\ \hline \end{array}$$

$$\begin{array}{r} 4) \quad 13 \\ + 64 \\ \hline \end{array}$$

$$\begin{array}{r} 10) \quad 81 \\ + 6 \\ \hline \end{array}$$

$$\begin{array}{r} 5) \quad 74 \\ + 14 \\ \hline \end{array}$$

$$\begin{array}{r} 11) \quad 47 \\ + 22 \\ \hline \end{array}$$

$$\begin{array}{r} 6) \quad 27 \\ + 51 \\ \hline \end{array}$$

$$\begin{array}{r} 12) \quad 45 \\ + 4 \\ \hline \end{array}$$

Answers:-

$$\begin{array}{r} 1) \quad 34 \\ + 23 \\ \hline 57 \end{array}$$

$$\begin{array}{r} 7) \quad 51 \\ + 26 \\ \hline 77 \end{array}$$

$$\begin{array}{r} 2) \quad 43 \\ + 6 \\ \hline 49 \end{array}$$

$$\begin{array}{r} 8) \quad 27 \\ + 41 \\ \hline 68 \end{array}$$

$$\begin{array}{r} 3) \quad 73 \\ + 6 \\ \hline 79 \end{array}$$

$$\begin{array}{r} 9) \quad 52 \\ + 34 \\ \hline 86 \end{array}$$

$$\begin{array}{r} 4) \quad 13 \\ + 64 \\ \hline 77 \end{array}$$

$$\begin{array}{r} 10) \quad 81 \\ + 6 \\ \hline 87 \end{array}$$

$$\begin{array}{r} 5) \quad 74 \\ + 14 \\ \hline 88 \end{array}$$

$$\begin{array}{r} 11) \quad 47 \\ + 22 \\ \hline 69 \end{array}$$

$$\begin{array}{r} 6) \quad 27 \\ + 51 \\ \hline 78 \end{array}$$

$$\begin{array}{r} 12) \quad 45 \\ + 4 \\ \hline 49 \end{array}$$

4. Add the numbers:-

05.11.2020

$66 + 31 =$

$45 + 34 =$

$49 + 40 =$

$10 + 36 =$

$29 + 70 =$

$30 + 58 =$

$45 + 54 =$

$36 + 50 =$

$63 + 35 =$

$87 + 10 =$

$13 + 16 =$

$10 + 12 =$

Answers:-

06.11.2020

$66 + 31 = 97$     $45 + 34 = 79$     $49 + 40 = 89$     $10 + 36 = 46$

$29 + 70 = 99$     $30 + 58 = 88$     $45 + 54 = 99$     $36 + 50 = 86$

$63 + 35 = 98$     $87 + 10 = 97$     $13 + 16 = 29$     $10 + 12 = 22$

5. Add mentally and write True or False:-

a. $12 + 9 = 30$	
b. $46 + 20 = 76$	
c. $23 + 11 = 34$	
d. $59 + 07 = 49$	
e. $81 + 19 = 100$	
f. $12 + 16 = 41$	

Answers:

a. $12 + 9 = 30$	<b>False</b>
b. $46 + 20 = 76$	<b>False</b>
c. $23 + 11 = 34$	<b>True</b>
d. $59 + 07 = 49$	<b>False</b>
e. $81 + 19 = 100$	<b>True</b>
f. $12 + 16 = 41$	<b>False</b>

6. Add the numbers on the numberline:-

(a)  $22 + 6 =$



(b)  $45 + 7 =$

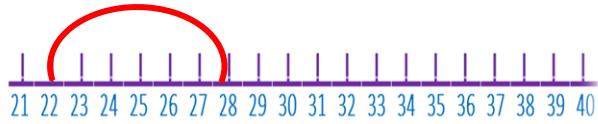


(c)  $82 + 10 =$

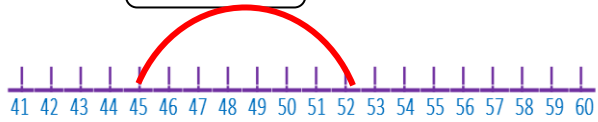


Answers:-

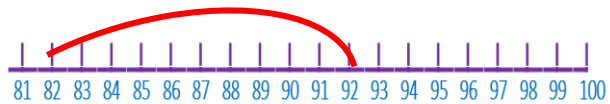
(a)  $22 + 6 = 28$



(b)  $45 + 7 = 52$



(c)  $82 + 10 = 92$



07.11.2020

7. Add the numbers:-

$\begin{array}{r} 61 \\ +9 \\ \hline \end{array}$	$\begin{array}{r} 84 \\ +6 \\ \hline \end{array}$	$\begin{array}{r} 62 \\ +9 \\ \hline \end{array}$	$\begin{array}{r} 62 \\ +8 \\ \hline \end{array}$	$\begin{array}{r} 66 \\ +6 \\ \hline \end{array}$	$\begin{array}{r} 48 \\ +3 \\ \hline \end{array}$
---	---	---	---	---	---













$\begin{array}{r} 46 \\ +7 \\ \hline \end{array}$	$\begin{array}{r} 51 \\ +9 \\ \hline \end{array}$	$\begin{array}{r} 68 \\ +6 \\ \hline \end{array}$	$\begin{array}{r} 56 \\ +8 \\ \hline \end{array}$	$\begin{array}{r} 21 \\ +9 \\ \hline \end{array}$	$\begin{array}{r} 71 \\ +9 \\ \hline \end{array}$
---	---	---	---	---	---

Answers:-

$\begin{array}{r} 61 \\ +9 \\ \hline 70 \end{array}$	$\begin{array}{r} 84 \\ +6 \\ \hline 90 \end{array}$	$\begin{array}{r} 62 \\ +9 \\ \hline 71 \end{array}$	$\begin{array}{r} 62 \\ +8 \\ \hline 70 \end{array}$	$\begin{array}{r} 66 \\ +6 \\ \hline 72 \end{array}$	$\begin{array}{r} 48 \\ +3 \\ \hline 51 \end{array}$
--	--	--	--	--	--

$\begin{array}{r} 46 \\ +7 \\ \hline 53 \end{array}$	$\begin{array}{r} 51 \\ +9 \\ \hline 60 \end{array}$	$\begin{array}{r} 68 \\ +6 \\ \hline 74 \end{array}$	$\begin{array}{r} 56 \\ +8 \\ \hline 64 \end{array}$	$\begin{array}{r} 21 \\ +9 \\ \hline 30 \end{array}$	$\begin{array}{r} 71 \\ +9 \\ \hline 80 \end{array}$
--	--	--	--	--	--

8. Solve these word problems:-

		WORKING OUT
1)	There are 24  . 24  more come. What is the total? _____	
2)	I have 16  . I buy 23  more. How many do I have now? _____	
3)	Joey catches 27  . Julie catches 14  . What is the sum? _____	
4)	There are 21  . 16  more come. How many altogether? _____	
5)	I have 16  . I get 28  more. How many in all? _____	
6)	I see 32  . I see 16  more. What is the sum? _____	

Answers:-


		WORKING OUT
1)	There are 24 🦋. 24 🦋 more come. What is the total? <u>48</u>	<u>24 + 24 = 48</u>
2)	I have 16 🍌. I buy 23 🍌 more. How many do I have now? <u>39</u>	<u>16 + 23 = 39</u>
3)	Joey catches 27 🐞. Julie catches 14 🐞. What is the sum? <u>41</u>	<u>27 + 14 = 41</u>
4)	There are 21 🐦. 16 🐦 more come. How many altogether? <u>48</u>	<u>21 + 16 = 48</u>
5)	I have 16 🧦. I get 28 🧦 more. How many in all? <u>44</u>	<u>16 + 28 = 44</u>
6)	I see 32 🐠. I see 16 🐠 more. What is the sum? <u>48</u>	<u>32 + 16 = 48</u>

CH- 7

ORDINAL  
NUMBERS

09.11.2020  
to  
14.11.2020

Do these following sums in the book:



**1. Complete the ordinal numbers. Then, answer the questions.**

(a) On which position is the boy who is holding a bat?

Ans. Sixth

(b) On which position is the girl with two pony tails?

Ans. Second



(c) On which position is the boy with his hands up?

Ans. Eighth

(c) On which position is the boy wearing a hat?

Ans. Seventh

**II. Write the ordinal numbers in word:**

1. 5<sup>th</sup>- fifth
2. 9<sup>th</sup>- ninth
3. 3<sup>rd</sup>- third
4. 8<sup>th</sup>- eighth
5. 2<sup>nd</sup>- second
6. 1<sup>st</sup>- first
7. 10<sup>th</sup>- tenth
8. 7<sup>th</sup>- seventh
9. 4<sup>th</sup>- fourth
10. 6<sup>th</sup>- sixth

**III. Match the following:**

- | <b>A</b>   | <b>B</b>           |
|------------|--------------------|
| 1. Seventh | a. 4 <sup>th</sup> |
| 2. Eighth  | b. 6 <sup>th</sup> |
| 3. Third   | c. 7 <sup>th</sup> |
| 4. Sixth   | d. 8 <sup>th</sup> |
| 5. Fourth  | e. 3 <sup>rd</sup> |

**IV. write in figure:**

1. Fifth- 5<sup>th</sup>
2. Seventh- 7<sup>th</sup>
3. Third- 3<sup>rd</sup>
4. Tenth- 10<sup>th</sup>
5. Ninth- 9<sup>th</sup>
6. Second- 2<sup>nd</sup>
7. Eighth- 8<sup>th</sup>
8. Sixth- 6<sup>th</sup>
9. Fourth- 4<sup>th</sup>
10. First- 1<sup>st</sup>

**REVISION OF ROUND 1 TEST**

**16.11.20 –  
21.11.20**

Q1. Match the numbers on the left to the words on the right:

- | A      | B          |
|--------|------------|
| a) 4th | 1) second  |
| b) 1st | 2) seventh |
| c) 9th | 3) sixth   |
| d) 7th | 4) fourth  |
| e) 2nd | 5) ninth   |
| f) 6th | 6) first   |

Q2. Add the numbers:

- a)  $23+4=$   
 b)  $15+3=$   
 c)  $34+2=$   
 d)  $52+7=$   
 e)  $24+5=$

Q3. Addition of two digit numbers:-

a) $74$	b) $56$
$+14$	$+21$
_____	_____
_____	_____

c) $55$	d) $70$
$+41$	$+26$
_____	_____
_____	_____

Q4. Add mentally and write True/False:-

- a)  $25+20=55$  \_\_\_\_\_  
 b)  $18+11=29$  \_\_\_\_\_  
 c)  $15+23=28$  \_\_\_\_\_  
 d)  $44+21=65$  \_\_\_\_\_  
 e)  $52+14=76$  \_\_\_\_\_

Q5. Add by carry over :-

a) $46$	b) $73$	c) $69$
$+9$	$+19$	$+23$
_____	_____	
_____	_____	
_____	_____	

d) $47$	e) $88$
$+45$	$+23$
_____	_____
_____	_____

Q6. Solve these word problems:-

- a) Priya keeps 48 cookies in a container. Mother comes and keeps 32 more. How many cookies are there in the container?

**23.11.2020**  
**to**  
**28.11.2020**

b) There are 52 pearl beads. Priti buys 29 more. How many beads are there in total?

**ANSWERS**

Q1. Match the numbers on the left to the words on the right:

- | A      | B              |
|--------|----------------|
| a) 4th | 1) second (e)  |
| b) 1st | 2) seventh (d) |
| c) 9th | 3) sixth (f)   |
| d) 7th | 4) fourth (a)  |
| e) 2nd | 5) ninth (c)   |
| f) 6th | 6) first (b)   |

Q2. Add the numbers:

- a)  $23+4=27$
- b)  $15+3=18$
- c)  $34+2=36$
- d)  $52+7=59$
- e)  $24+5=29$

Q3. Addition of two digit numbers:-

a) $\begin{array}{r} 74 \\ +14 \\ \hline \end{array}$	b) $\begin{array}{r} 56 \\ +21 \\ \hline \end{array}$
$\underline{\quad 88 \quad}$	$\underline{\quad 77 \quad}$

c) $\begin{array}{r} 55 \\ +41 \\ \hline \end{array}$	d) $\begin{array}{r} 70 \\ +26 \\ \hline \end{array}$
$\underline{\quad 96 \quad}$	$\underline{\quad 96 \quad}$

Q4. Add mentally and write True/False:-

- a)  $25+20=55$  False
- b)  $18+11=29$  True
- c)  $15+23=28$  False
- d)  $44+21=65$  True
- e)  $52+14=76$  False

Q5. Add by carry over :-

a) $\begin{array}{r} 46 \\ +9 \\ \hline \end{array}$	b) $\begin{array}{r} 73 \\ +19 \\ \hline \end{array}$	c) $\begin{array}{r} 69 \\ +23 \\ \hline \end{array}$
$\underline{\quad 55 \quad}$	$\underline{\quad 92 \quad}$	$\underline{\quad 92 \quad}$

d) $\begin{array}{r} 47 \\ +45 \\ \hline \end{array}$	e) $\begin{array}{r} 88 \\ +23 \\ \hline \end{array}$
$\underline{\quad 92 \quad}$	$\underline{\quad 111 \quad}$

Q6. Solve these word problems:-

a) Priya keeps 48 cookies in a container. Mother comes and keeps 32 more. How many cookies are there in the container?

$$\begin{array}{r} 48 \\ + 32 \\ \hline \end{array}$$

80

Ans: 80 cookies

b) There are 52 pearl beads. Priti buys 29 more. How many beads are there in total?

$$\begin{array}{r} 52 \\ + 29 \\ \hline \end{array}$$

81

Ans: 81 cookies

SUBJECT	CHAPTERS	ASSIGNMENT	REFERENCE LINK
Eng Lang	<p>Ch 16 On, In, Under and Over</p> <p>2.11.20</p>	<p><b>*The assignments given below have to be done in the English language notebook.</b></p> <p>Page no. 89</p> <p><u>Ex A. Look at the pictures and fill in the blanks using on, in, under or over.</u></p> <ol style="list-style-type: none"> <li>1. The girl is <b>on</b> the chair.</li> <li>2. The baby is <b>in</b> the cradle.</li> <li>3. The bird flew <b>over</b> the branch.</li> <li>4. The cup is <b>in</b> the saucer.</li> <li>5. The monkey is <b>under</b> the table.</li> <li>6. The books are <b>on</b> the table.</li> <li>7. The books are <b>in</b> the bag.</li> <li>8. The man is sleeping <b>under</b> the tree.</li> <li>9. The girl held the umbrella <b>over</b> her head.</li> </ol> <p><u>EX.A Choose the correct word.</u></p> <ol style="list-style-type: none"> <li>1. The bottle is kept <b>on</b> the table.</li> <li>2. We are playing <b>in</b> the park.</li> <li>3. We put butter <b>on</b> the toast.</li> <li>4. Birds lay eggs <b>in</b> the nest.</li> <li>5. Lay the blanket <b>on</b> him.</li> <li>6. The baby is sitting <b>on</b> the carpet.</li> <li>7. The cup is <b>in</b> my hands.</li> <li>8. The children climbed <b>over</b> the fence.</li> <li>9. The boy is hiding <b>uner</b> the bed.</li> <li>10. The river is flowing <b>under</b> the bridge.</li> </ol>	<p><a href="https://youtu.be/VK-kXkXTBc">https://youtu.be/VK-kXkXTBc</a></p>

4.11.20

EX.B Match the columns.

Column A	Column B
1. The plane flew	b. over the houses
2. The old man is resting	a. under a tree.
3. The fruits are	d. in the basket.
4. Birds are sitting	f. on the tree.
5. I kept my lunch box	g. in the bag.
6. She kept her notebooks	c. in the cupboard.
7. I wear a ring	e. on my finger.

EX.C Look at the pictures and answer these questions.

1. Where are the fruits?

A. The fruits are on the table.

2. Where are the vegetables?

A. The vegetables are in the basket.

3. Where are the books?

A. The books are on the shelf.

4. Where is the dog sleeping?

A. The dog is sleeping under the tree.

6.11.20

5. Where is the umbrella?

A. The umbrella is over the boy.

EX. D Correct these sentences.

1. I keep my marbles **in** a bag.
2. Nancy is **in** the bedroom.
3. The castle is **on** the hills.
4. The dustbin is **under** the sink.
5. The library is **on** the fourth floor.
6. I placed the vase **on** the table.
7. The fan is **over** the head.
8. Keep your bag **on** the chair.
9. My aunt lives **in** New York.
10. The cat hid **under** the table.
11. Keep the lunch box **on** the table.
12. Four of us slept **on** the bed.

Learn

EX A. Choose the correct word. Complete the word pairs.

**Ch 17 Words Pairs**

1. day and **night**
2. lock and **key**
3. paint and **brush**
4. left and **right**
5. up and **down**
6. black and **white**
7. first and **second**
8. right and **wrong**

9.11.20

EX. B Match the pictures to complete these word pairs.

A	B
1. BREAD	a. CHAIR
2. HAMMER	b. BALL
3. TABLE	c. BUTTER
4. BAT	d. NAIL
5. CAT	e. PENCIL
6. PEN	f. THREAD
7. NEEDLE	g. MOUSE

1-C 2-D 3-A 4-B 5-G 6-E 7-F

Practise

EX A. Complete the word pair using words from the box.

1. rock and roll
2. salt and pepper
3. east and west
4. first and last
5. knife and fork
6. cream and sugar
7. read and write
8. profit and loss
9. right and left



11.11.20

EX B. Fill in the blanks to complete the word pairs.

1. Some hotels provide hot and **cold** water.
2. The **bride** and groom looked lovely.
3. I love fish and **chips**.
4. The sisters are as different as chalk and **duster**.
5. He earns his **bread** and butter by teaching.
6. There are **ups** and downs in business.
7. Remove your **socks** and shoes.
8. Let's listen to some rock and **roll**.
9. He looked good in **shirt** and tie.
10. The police played cat and **mouse** with the thief.

**Ch-19 Capital Letters and Full Stop**

**Choose a word in each set which should start with a capital letter:**

**(pg 105)--(Do it in the book)**

1) january     just     ju

2) like     london     le

3) cat     cak     christm

[https://youtu.be/4s\\_yhxgWVyo](https://youtu.be/4s_yhxgWVyo)

<https://youtu.be/R1MK82fmlQ4>

4) push  piku  paper

5) sunday  son  sunny

6) ash  africa  ant

7) mint  money  mumbai

8) holi  holiday  honour

13.11.20

**A. Rewrite these sentences using capital letters and**

**full stop.**

**(pg 106)--(Do it in the notebook )**

- 1) he plays the flute  
A) He plays the flute.

2) new delhi is the capital of India

A) New Delhi is the capital of India.

3) The river thames is in london

A) The river Thames is in London.

4) jim and bob are travelling to mumbai  
on friday

A) Jim and Bob are travelling to Mumbai  
on Friday.

5) deepak and pooja are best friends

A) Deepak and Pooja are best friends.

6) tomorrow is good friday

A) Tomorrow is Good Friday.

7) mr bose is a teacher

A) Mr Bose is a teacher.

8) Rohan has a pet cat named mint

A) Rohan has a pet cat named Mint.

9) aditya is a good boy

A) Aditya is a good boy.

10) we celebrate christmas on 25 december

A) We celebrate Christmas on 25

16.11.20

December.

**B. One word in each sentence should begin with a**

**capital letter. Encircle the word .Write the letter**

**in the blanks:**

**(pg 106)--(Do it in the book)**

1) Today is earth Day. \_\_\_\_\_

A) Today is **earth** Day. Earth

2) pooja and Shalu are planting a tree.  
\_\_\_\_\_

A) **pooja** and Shalu are planting a tree. Pooja

3) their teacher told them about Earth Day.  
\_\_\_\_\_

A) **Their** teacher told them about Earth Day.  
Their

4) shalu knows that trees are important.  
\_\_\_\_\_

A) **Shalu** knows that trees are important.  
Shalu

5) trees are home to birds. \_\_\_\_\_

A) **Trees** are home to birds. Trees

18.11.20

**C. What is wrong with these sentences**

**(pg 107)--(Do it in the note book)**

- 1) my birthday falls on a saturday this year.  
A) **My** birthday falls on a **Saturday** this year.
  
- 2) i love to watch cartoon shows  
A) **I** love to watch cartoon shows.
  
- 3) it snows more in january than in december  
A) **It** snows more in **January** than in **December**.
  
- 4) My friend jane was absent today  
A) My friend **Jane** was absent today.
  
- 5) I can speak french very well.  
A) I can speak **French** very well.
  
- 6) we have a holiday on independence day  
A) **We** have a holiday on **Independence Day**.
  
- 7) matt ate a slice of cake and some wafers  
A) **Matt** ate a slice of cake and some wafers.
  
- 8) My Uncle lives in chennai  
A) My **uncle** lives in **Chennai**.

20.11.20

9) Neelu's pet monty is very cute

A) Neelu's pet **Monty** is very cute.

10) Lina's father is a Doctor and mother is a Professor.

A) Lina's father is a **doctor** and mother is a **professor**.

**D. Put these words in the correct order to make sentences. Use capital letter and full stops. (pg 107)--Do it in the note book)**

1) eats / Jamie / noodles

A) Jamie eats noodles.

2) smart / are / we / students

A) We are smart students.

3) funny / the / is / clown

A) The clown is funny.

4) are / roses / red / these

A) These roses are red.

5) swim / water / in / fish

A) Fish swim in water.

6) bakes / cakes / shiv / tasty

A) Shiv bakes tasty cakes.



	27.11.20	<p>Q1. Where do the seeds come from? A1. The seeds come from plants. .</p> <p>Q2. Why do seeds leave the plants? A2. When seeds are ripe they leave the plants and find a new place to grow.</p> <p>Q3. How many types of seeds are there? A3. Seeds are of many shapes and sizes.</p> <p><b>II. Fill in the blanks with the words given in the bracket :</b> ( animals, float, light )</p> <ol style="list-style-type: none"><li>1. Seeds are small and <u>light</u> .</li><li>2. Some seeds are moved by <u>animals</u> .</li><li>3. Some seeds <u>float</u> on the top of the water until they reach land.</li></ol> <p><b>III. Opposites :</b></p> <ol style="list-style-type: none"><li>1. top x bottom</li><li>2. ripe x raw</li><li>3. light x heavy</li><li>4. start x stop</li><li>5. float x sink</li></ol> <p><b>IV. Give one word :</b></p> <ol style="list-style-type: none"><li>1. developed to the point of readiness for harvesting and eating. ----- <u>ripe</u></li><li>2. in motion ----- <u>moving</u></li></ol>	
--	----------	--	--



		3.become larger or greater over a period of time---- <u>grow</u>	
<b>Eng Lit</b>	<b>Animal Parade (Poem)</b>	<p><b>*All the assignments given below have to be done in the notebook.</b></p> <p><b>I. Learn and write the first 8 lines of the poem.</b></p> <p><b>II. Word Meaning.</b></p> <p>a. parade – march</p> <p>b. marching – walking in a determined away</p> <p>c. climb – to move with difficulty or effort</p> <p>d. clean – free from dirt</p> <p><b>III. Opposites.</b></p> <p>a. laugh x cry</p> <p>b. little x big</p> <p>c. clean x dirty</p> <p><b>IV. Answer the following questions.</b></p> <p>Q1. Who is marching one by one ?</p> <p>Ans. The elephants are marching one by one.</p> <p>Q2. Which animals are marching three by three ?</p> <p>Ans. The monkeys are marching three by three.</p>	

**10.11.20**

Q3. What do the three little animals do ?

Ans. The three little animals laugh and play.

Q4. Which animal runs to have some fun ?

Ans. The elephant runs to have some fun.

**V. Reference to context.**

**1. Tigers marching in twos and twos, One runs to clean his shoes.**

Q1. How are tigers marching ?

Ans. Tigers are marching in twos and twos.

Q2. Which animal runs to clean his shoes ?

Ans. The tiger runs to clean his shoes.

**2. The three little animals, laugh and play, laugh and play.**

Q1. How many animals were there ?

Ans. There were three animals.

Q2. What were they doing ?

Ans. They were laughing and playing.

	<p><b>12.11.20</b></p> <p><b>The Clever Frog</b></p> <p><b>17.11.20</b></p>	<p><b>VI. Make Sentences.</b></p> <p>1. fun – The children were having fun in the playground.</p> <p>2. climb – We began to climb the hill.</p> <p>3. clean – The room was spotlessly clean.</p> <p><b>I. Word Bank:</b></p> <p>clever</p> <p>jumping</p> <p>suddenly</p> <p>jumped</p> <p>pond</p> <p>bush</p> <p>hopping</p> <p>animal</p> <p>pounced</p> <p>afraid</p> <p>quickly</p> <p><b>II. Word Meanings:-</b></p> <p>1) spotted – saw</p> <p>2) pounced – jumped on something to catch it</p> <p>3) waved – moved one’s hand from side to side in the air</p>	
--	---	--	--

	<b>19.11.20</b>	<b>III. Give the opposites of the following words:</b>  a) go x come b) laugh x cry c) dirty x clean d) clever x stupid e) afraid x confident f) rest x work g) near x far h) tired x fresh i) asleep x awake	
	<b>24.11.20</b>	<b>IV. Reference to the context:</b>  a) He thought, “ That seems to be a good place to rest.”  Q1. Who said these lines?  Ans) The frog said these lines.  Q2. Which place seems good to rest?  Ans) The bush on top of the hill seems to be a good place to rest.  b) “I am hungry and cannot find any big animal. Let me eat this frog at once.”  Q1) Who said these lines?  Ans) The tiger said these lines.  Q2) What did the tiger do after seeing the frog?  Ans) The tiger pounced on the frog and caught him.	

26.11.20

**V. Answer the following questions:-**

Q1. Who was clever?

Ans) The frog was clever.

Q2. What did the frog see on the hill?

Ans) The frog spotted a bush on top of a hill.

Q3. What did the frog do?

Ans) The frog jumped into the pond and swam for a long time.

Q4. What was the tiger looking for?

Ans) The tiger was looking for food.

Q5. What kind of day was it?

Ans) It was a hot day and the sun was shining brightly in the sky.

Q6. Was the tiger able to find the frog in the pond?

Ans) No, the tiger was unable to find the frog.

**VI. Make sentences:**

a) brightly – The sun shines brightly.

b) tired – My mother is very tired.

c) clever- The frog was very clever.

d) hungry- The lion was very hungry.

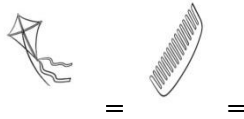
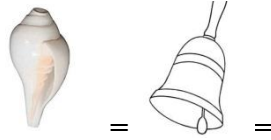

e) pond- The lion saw a big pond near the forest.

SUBJECT	CHAPTERS	ASSIGNMENT	REFERENCE
हिंदी 02.11.2020	अं की मात्रा	जोड़कर लिखें। १. रं + ग----- = २. शं + ख ----- = ३. गं + गा----- = ४. लं + बा----- = ५. जं + ग + ल----- = ६. कं + च + न----- = ७. खं + भा----- = ८. पं + जा----- =	Link:  <a href="https://youtu.be/IlgJ72cOu8E">https://youtu.be/IlgJ72cOu8E</a>
03.11.2020		समान लय वाले शब्द लिखें। १. संग----- = २. गंगा----- = ३. मंगल----- = ४. शंख ----- =	
04.11.2020		खाली जगह भरे। १. व _ त----- = २. प _ ग----- = ३. _ चन----- = ४. _ दन----- = ५. _ दिर----- = ६. _ दर----- = ७. आ _ द----- = ८. _ चमी----- =  वाक्य बनाएं। १. जंगल = २. आनद = ३. अंडा = ४. बंदर =	

05.11.2020

- ५ .पतंग=  
६ .लंबा=  
७ .मंदिर=  
८ .झंडा=

मात्रा की चंद्रबिंदु चित्रों के नाम लिखें।



06.11.2020

जोड़कर लिखें।

१.गाँ+व----- =

२.काँ+च----- =

३.कु+आँ----- =

४.क+हाँ----- =

५.भँ+व+रा----- =

६.हँ+स+ना----- =

07.11.2020

सही शब्द पर )\ ( निशान लगायें

१.चांदनी( )

चंदानिं( )

चाँदनी( )

२.पांव( )

पाँव ( )

पावं( )

३.बासुरी( )

बाँसुरी( )

बंसुरी( )

४.ऊंट ( )

ऊँट ( )

उंट( )

एक शब्द के अनेक वाले रूप लिखे।

१.घड़ी----- =

२.आँख----- =

३.चिड़िया----- =


४.चींटी----- =

५.मुरगी----- =

६.मटकी----- =

मिलान करें।

१



साँप



09.11.2020

२



चाँद

३



कुआँ

४



आँख

५



मूँछ

अ मात्रा की :

सही स्थान पर मात्रा लगायें।

१. बासुरी----- =

२. उगली----- =

३. अगूठी----- =

४. ऊट----- =

५. आगन----- =

६. झाकना----- =


७. आचल----- =

<p>10.11.2020</p>		<p><b>जोड़कर लिखें।</b> १. अ+त= : २. प्रा+त:= ३. पु+न:= ४. अं+त+त= : ५. दु +: स+ ह= ६. प्रा +य= : ७. न+ म= :</p> <p><b>दिए गए वर्णों में सभी मात्राएँ लगाकर लिखिए और पढ़िए।</b> १. क,का,कि,की,कु,कू,के,कै, को,कौ,कं,कः २. ग ३. च ४. ज ५. ट ६. द ७. न ८. ल</p>	
<p>11.11.2020</p>	<p>(क्षत्रज्ञश्र)</p>	<p><b>जल में रहने वाले पशुओं के नाम लिखें-</b> १. _____ २. _____ ३. _____ ४. _____</p>	

<p>12.11.2020</p>		<p>जंगल में रहने वाले पशुओं के नाम लिखें-</p> <p>१. _____</p> <p>२. _____</p> <p>३. _____</p> <p>४. _____</p> <p><b>वाक्य बनाएँ:-</b></p> <p>१ .प्रातः=</p> <p>२ .अत= :</p> <p>३ .पुन= :</p> <p>४ .प्राय = :</p> <p><b>जोड़कर लिखें</b></p> <p>१ .क्ष+मा=</p> <p>२ .र+क्षा=</p> <p>३ .मि+त्र=</p> <p>४ .पु+त्र=</p> <p>५ .त्रि+भु+ज=</p> <p>६ .ज्ञा+न</p> <p>७ .ज्ञा+नी=</p> <p>८ .आ+श्र+म=</p> <p>९ .श्र+व+ण=</p> <p>१० .प+रि+श्र+म=</p> <p><b>खाली जगह भरें</b></p> <p>१ .__ मा=</p> <p>२ .क __ =</p> <p>३ .चि __ =</p> <p>४ .शि __ =</p> <p>५ .शि __ क=</p> <p>६ .अ __ य=</p> <p>७ .__ म=</p> <p>८ .__ मिक=</p>	
<p>13.11.2020</p>			

17.11.2020

चित्रों के नाम लिखें-



=



=



=

18.11.2020

नोट:- उपरोक्त कार्य अपनी अभ्यास पुस्तिका (नोट बुक) में लिखें।

इस पाठ से सम्बंधित पुस्तक में दिए गए अभ्यास कार्य पुस्तक में ही करें।

19.11.2020

**ANSWER SHEET**

**जोड़ कर लिखें।**

१. रं + ग = रंग
२. शं + ख = शंख
३. गं + गा = गंगा
४. लं + बा = लंबा
५. जं + ग + ल = जंगल
६. कं + च + न = कंचन
७. खं + भा = खंभा
८. पं + जा = पंजा

**समान लय वाले शब्द लिखें।**

१. संग = तंग रंग
२. गंगा = पंगा दंगा
३. मंगल = जंगल दंगल
४. शंख = पंख

**खाली जगह भरे।**

१. व \_\_ त = वसंत
२. प \_\_ ग = पतंग
३. \_\_ चन = कंचन
४. \_\_ दन = चंदन
५. \_\_ दिर = मंदिर
६. \_\_ दर = बंदर
७. आ \_\_ द = आनंद
८. \_\_ चमी = पंचमी

**वाक्य बनाएं।**

१. जंगल =
२. आनंद =
३. अंडा =
४. बंदर =

23.11.2020

५. पतंग =  
६. लंबा =  
७. मंदिर =  
८. झंडा =

चित्रों के नाम लिखें।



= अंगूर



= बंदर



=



= घंटी

शंख



=



= कंघा

पतंग

जोड़ कर लिखें।

१. गाँ+व = गाँव

२. काँ+च = काँच

३. कु+आँ = कुआँ

४. क+हाँ = कहाँ

५. भँ+व+रा = भँवरा

सही शब्द पर (✓) निशान लगायें।

१. चांदनी ( )

चंदानि ( )

चाँदनी (✓)

२. पांव ( )

पाँव (✓)

पावं ( )

३. बासुरी ( )

बाँसुरी (✓)

बंसुरी ( )

४. ऊंट ( )

ऊँट(✓)

उंट ( )

**एक शब्द के अनेक वाले रूप लिखे।**

१. घड़ी = घड़ियाँ

२. आँख = आँखें

३. चिड़िया = चिड़ियाँ

४. चींटी = चींटियाँ

५. मुरगी = मुरगियाँ

६. मटकी = मटकियाँ

**मिलान करें।**

१



साँप - ४

२



चाँद - ३

३



कुआँ- ५

४



आँख- १

५



मूँछ- २

**सही स्थान पर मात्रा लगायें।**

१. बासुरी = बाँसुरी
२. उगली = उँगली
३. अगूठी = अँगूठी
४. ऊट = ऊँट
५. आगन = आँगन
६. झाकना = झाँकना
७. आचल = आँचल

**जोड़कर लिखें।**

१. अ+तः = अतः
२. प्रा+तः = प्रातः
३. पु+नः = पुनः
४. अं+त+तः = अंततः
५. दुः+स+ह = दुःसह
६. प्रा+यः = प्रायः
७. न+मः = नमः



दिए गए वर्णों में सभी मात्राएँ लगाकर लिखिए और पढ़िए।

१. क, का, कि, की, कु, कू, के, कै, को, कौ, कं, कः

२. ग

३. च

४. ज

५. ट

६. द

७. न

८. ल

जल में रहने वाले पशुओं के नाम लिखें

१. मगर

२. कछुआ

३. दरियाई घोडा

४. मछली

जंगल में रहने वाले पशुओं के नाम लिखें

१. शेर

२. हाथी

३. चीता

४. बाघ

वाक्य बनाएँ :-

१. प्रातः =

२. अतः =

३. पुनः =

४. प्रायः =

जोड़कर लिखें।

१. क्ष+मा = क्षमा

२. र+क्षा = रक्षा

३. मि+त्र = मित्र

४. पु+त्र = पुत्र


५. त्रि+भु+ज = त्रिभुज

६. ज्ञा+न = ज्ञान  
७. ज्ञा+नी = ज्ञानी  
८. आ+श्र+म = आश्रम  
९. श्र+व+ण = श्रवण  
१०. प+रि+श्र+म = परिश्रम

### खाली जगह भरें।

१. \_\_ मा = क्षमा  
२. क \_\_ = कक्षा  
३. चि \_\_ = चित्र  
४. शि \_\_ = शिक्षा  
५. शि \_\_ क = शिक्षक  
६. अ \_\_ य = अक्षय  
७. \_\_ म = श्रम  
८. \_\_ मिक = श्रमिक

### चित्रों के नाम लिखें



= शिक्षक



= त्रिशूल



= क्षत्रिय



= यज्ञ

## REVISION SHEET

### जोड़कर लिखें।

१. र+थ =
२. म+ह+ल =
३. ब+र+त+न =
४. क+ट+ह+ल =
५. द+म+क+ल+ =
६. थ+र+म+स+ =
७. उ+प+व+न =
८. ग+र+द+न =

### मात्रा ( T ) हटाकर नया शब्द बनाइए।

१. हाल =
२. धान =
३. घाट =
४. पालक =
५. कार =
६. बाल =

### मात्रा ( T ) लगाकर नया शब्द बनाइए।

- १ छत =
- २ नल =
- ३ मत =
- ४ तल =

### खाली जगह भरें।

१. डि\_ या =
२. त\_\_ या =
३. \_\_ रन =
४. \_\_ कट =
५. बा\_\_ श =
६. ना\_\_ यल =
७. \_\_ लास =
८. साइ\_\_ ल =

**वाक्य बनाएँ।**

१. चिड़िया =

२. गिटार =

३. डलिया =

४. किशमिश =

५. गिरगिट =

६. किसान =

७. विमान =

८. धनिया =

**प्रश्नों के उत्तर लिखें।**

१. आज कौन सी पंचमी है ?

२. आसमान किससे भरा है ?

३. भारत का क्या बज रहा था ?

**एक शब्द के अनेक वाले रूप लिखिए।**

१. मुरगी =

२. मटकी =

३. घड़ी =

४. पतंग =

५. लड़की =

**पक्षियों के नाम लिखें।**

१ \_\_\_\_\_

२ \_\_\_\_\_

३ \_\_\_\_\_

४ \_\_\_\_\_

५ \_\_\_\_\_

**प्रश्नों के उत्तर लिखें।**

१ अक्षय के पिता क्या है ?

२ चित्रा को क्या पढ़ना पसंद है ?

३ अक्षय क्या बनना चाहता है ?

**अपने मित्र का चित्र लगा कर उस पर दो तीन वाक्य लिखें।**

<p><b>SCIENC E</b></p>	<p>Ch 1 Our Neighbour hood</p> <p>2/11/20</p> <p>3/11/20</p>	<ul style="list-style-type: none"><li>• All the questions to be in the notebook.</li></ul> <p><b><u>ACTIVITY:</u></b> - Draw 5 pictures of things you see in your neighbourhood. Do it on the white side of your notebook.</p> <p>Exercises – To be done in the rules side of the notebook.</p> <p><b><u>I. Word Bank</u></b></p> <p>Neighbours</p> <p>Surrounded</p> <p>Important</p> <p>Relations</p> <p>Neighbourhood</p> <p>Comfortable</p> <p>Market</p> <p>Stamps</p> <p>Postcard</p> <p>Envelopes</p> <p>Post office</p> <p>Worship</p> <p>Hospital</p> <p>Restaurant</p> <p>Railway station</p> <p><b><u>II. Fill in the blanks:-</u></b></p> <p>a) People who live next to each other are called <u>neighbours.</u></p>	<p><a href="https://youtu.be/iwxkwPA8c68">https://youtu.be/iwxkwPA8c68</a></p> <p><a href="https://youtu.be/rZX3jAxxU8l">https://youtu.be/rZX3jAxxU8l</a></p>
----------------------------	--	--	---

- b) Neighbours help us in time of need.
- c) We go to hospital when we fall sick.
- d) Letters come from post office.

**III. Give one word answer:-**

- a) People living next to our house – **Neighbours**
- b) People go to buy things from – **Market**
- c) What do we do in place of worship – **Pray**
- d) We go to study – **School**.
- e) Take a bus – **Bus stop**

4/11/20

**IV. Answer the following questions:-**

- a) Who are neighbours?

Ans) **People living next to our house are our neighbours.**

- b) What is neighbourhood?

Ans) **The places around our house and the people living and working together is our neighbourhood.**

- c) Why do we go to post office?

Ans) **We go to post office to buy stamps, post cards, envelopes and to post letters.**

- d) Why do we go to a park?

Ans) **We go to a park to play with our friends.**

- e) Where do we go to take an auto-rickshaw?

Ans) **We go to an auto stand to take an auto rickshaw.**

5/11/20

**V. Match the following:-**

A

B

- |                                     |                    |
|-------------------------------------|--------------------|
| 1. When we are ill                  | a) to study [ 4 ]  |
| 2. keep our money                   | b) neighbours [3 ] |
| 3. people living next to each other | c) hospital [ 1 ]  |
| 4. school                           | d) to play [5 ]    |
| 5. park                             | e) bank [ 2 ]      |

\*To be done in the book

**Page 141**

6/11/20

**Exercise Time**

**A. Answer the following questions:**

1. Name any four places in your neighbourhood?

- Ans) 1. **Hospital**                      3. **Bank**  
          2. **Park**                              4. **Post office**

2. Name one place in your neighbourhood you visit:

Everyday – **School**

Sometimes- **Bank**

**B. Fill in the blanks:**

1. We go to the market to buy vegetables
2. Our money is safe in a bank.
3. Post office is a place from where we buy stamps.
4. We go to a hospital when we are ill.





	11.11.20	<p><b>III. Fill in the blanks :</b></p> <p>1 .A <u>milkman</u> brings milk for us.</p> <p>2. A <u>carpenter</u> makes furniture.</p> <p>3. We should <u>respect</u> our helpers.</p> <p>4. A <u>doctor</u> cures the sick people.</p>	
	12.11.20	<p><b>IV. Match the following :</b></p> <p>1.I look after a garden                      Doctor 4</p> <p>2.I grow crops                                      Teacher 3</p> <p>3.I treat people who is sick                      Gardener 1</p> <p>4.I teach students                                  Farmer 2</p>	
	13.11.20	<p><b>V. Answer the following :</b></p> <p>Q1. Who stitches our clothes ?</p> <p>Ans - <u>A tailor stitches our clothes.</u></p> <p>Q2. Who mends our shoes ?</p> <p>Ans - <u>A cobbler mends our shoes.</u></p> <p>Q3. Who teaches us ?</p> <p>Ans - <u>A teacher teaches us .</u></p> <p>Q4. How does a doctor help us ?</p> <p>Ans - <u>A doctor helps us by treating us when we fall sick</u></p>	<p><a href="https://youtu.be/dfA7M66S6Ko">https://youtu.be/dfA7M66S6Ko</a></p>

<b>SCIENC E</b>	<b>Ch-4. Festivals 16.11.20</b>	<p><b>*The assignments given below have to be done in the EVS copy.</b></p> <p><b>I. <u>Word Bank.</u></b></p> <p>celebrate, festivals, Christmas, decorating, special, exchange, Diwali, Goddess Lakshmi ,Lord Ganesha, favourite, Lord Rama, distribute, relatives, Ayodhya , Lord Jesus Christ ,Santa Claus, church, sledge ,Gurupurab, gurdwara, Guru Granth Sahib,langar, Sikhs, Eid, Republic Day, Independence Day, Gandhi Jayanti, national</p> <p><b>II. <u>Match the columns.</u></b></p> <table border="0"> <tr> <td style="text-align: center;">A</td> <td style="text-align: center;">B</td> </tr> <tr> <td>1.Guru Granth Sahib</td> <td>a Eid(3)</td> </tr> <tr> <td>2.Diyas</td> <td>b.Gurupurab(1)</td> </tr> <tr> <td>3. Sewain</td> <td>c. Christmas(4)</td> </tr> <tr> <td>4. Christmas tree Day(5)</td> <td>d. Independence Day(5)</td> </tr> <tr> <td>5. India became freee.</td> <td>e. Diwali (2)</td> </tr> </table>	A	B	1.Guru Granth Sahib	a Eid(3)	2.Diyas	b.Gurupurab(1)	3. Sewain	c. Christmas(4)	4. Christmas tree Day(5)	d. Independence Day(5)	5. India became freee.	e. Diwali (2)	<p><a href="https://youtu.be/imEgEZaWD1o">https://youtu.be/imEgEZaWD1o</a></p>
	A	B													
	1.Guru Granth Sahib	a Eid(3)													
2.Diyas	b.Gurupurab(1)														
3. Sewain	c. Christmas(4)														
4. Christmas tree Day(5)	d. Independence Day(5)														
5. India became freee.	e. Diwali (2)														
<b>17.11.20</b>	<p><b>III. Write the dates on which these festivals are celebrated.</b></p> <p>1.Christmas - <u>25<sup>th</sup> December</u></p> <p>2. Republic Day - <u>26<sup>th</sup> January</u></p> <p>3. Independence Day- <u>15<sup>th</sup> August</u></p> <p>4. Gandhi Jayanti- <u>2nd October</u></p>	<p><a href="https://youtu.be/pHzCoQ1-wOc">https://youtu.be/pHzCoQ1-wOc</a></p>													
<b>18.11.20</b>	<p><b>IV. <u>Fill in the blanks with am, is or are.</u></b></p> <p>1.<u>Diwali</u> is the festival of lights.</p> <p>2. <u>Langar</u> is a free meal served in a <u>gurdwara</u>.</p> <p>3. People wish each other "<u>Eid Mubarak</u>" on Eid.</p>	<p><a href="https://youtu.be/NVMRwJBfyHY">https://youtu.be/NVMRwJBfyHY</a></p>													

19.11.20

4. Santa Claus brings gifts for children on Christmas.
5. Mahatma Gandhi was born on 2<sup>nd</sup> October.
6. India became Republic on Republic Day.
7. Festivals are special days.
8. We light diyas in Diwali.
9. Christmas is celebrated on 25<sup>th</sup> December.
10. On Gurupurab, people go to the gurdwara.

**V. Answer the following questions.**

1. What are festivals?

Ans. Festivals are special days to have fun, meet people and exchange gifts.

2. What is Diwali?

Ans. Diwali is the festival of lights.

3. What do we do on Diwali?

Ans. We worship Goddess Lakshmi and Lord Ganesha. We light diyas and decorate our homes.

4. What do people do on Christmas?

Ans. On Christmas, people go to the church to offer prayers. They decorate Christmas trees at their homes.

5. Who brings gifts for children on Christmas?

Ans. Santa Claus brings gifts for children on Christmas.

6. Name 3 national festivals.

Ans. (i) Republic Day, (ii) Independence Day. (iii) Gandhi Jayanti

	<p><b>23.11 20</b></p>	<p><b>VI. <u>Write true or false.</u></b></p> <p>1. Diwali is celebrated on 25<sup>th</sup> December.- <u>False</u></p> <p>2. On Gurupurab, people go to church.- <u>False</u></p> <p>3. On Eid, people go to mosques to pray.- <u>True</u></p> <p>4. Independence Day is celebrated on 15<sup>th</sup> August.- <u>True</u></p> <p>5. Mahatma Gandhi was born on 2<sup>nd</sup> Oct.- <u>True</u></p>	
	<p><b>24.11.20</b></p>	<p><b>VII. <u>Give one word answer.</u></b></p> <p>1. During which festival do we light diyas? Ans. <u>Diwali</u></p> <p>2. What is celebrated on the birth of Jesus Christ? Ans. <u>Christmas</u></p> <p>3. Who brings gifts for children on Christmas? Ans. <u>Santa Claus</u></p> <p>4. Which animal pulls the sledge of Santa Claus? Ans. <u>A horse</u></p> <p>5. When is Independence Day celebrated? Ans. <u>15<sup>th</sup> August</u></p> <p>6. What is celebrated on 26<sup>th</sup> January? Ans. <u>Republic Day</u></p>	
	<p><b>REVISION</b></p> <p>(Ch1 Our Neighbourhood, Ch3- People who help us, Ch 4-Festivals)</p> <p><b>25.11.20</b></p>	<p><b><u>REVISION</u></b></p> <p><b>I. Give one word answer.</b></p> <p>1. People living next to each other.- <u>Neighbours</u></p> <p>2. People go to buy things from –<u>Market</u></p> <p>3. Person who stitches clothes – <u>Tailor</u></p> <p>4. We light diyas on – <u>Diwali</u></p> <p>5. We take a bus from – <u>Bus stop</u></p> <p>6. Person who cuts our hair - <u>Barber</u></p>	

	26.11.20	<p><b>II. Fill in the blanks.</b></p> <ol style="list-style-type: none"> <li>1. Neighbours help us in times of <u>need</u>.</li> <li>2. A <u>doctor</u> cures sick people.</li> <li>3. <u>Langar</u> is a free meal served in a <u>gurdwara</u>.</li> <li>4. <u>Christmas</u> is celebrated on 25<sup>th</sup> December.</li> <li>5. Letters come from <u>post office</u>.</li> <li>6. A carpenter makes <u>furniture</u>.</li> </ol> <p><b>III. Choose the correct option.</b></p> <ol style="list-style-type: none"> <li>1. We go to <u>hospital</u> when we fall sick. (hospital / bank)</li> <li>2. A <u>mechanic</u> repairs vehicles. (mechanic / doctor)</li> <li>3. A <u>teacher</u> teaches us. (doctor / teacher)</li> <li>4. Our money is safe in a <u>bank</u>. (bus stop / bank)</li> <li>5. Mahatma Gandhi was born on <u>2<sup>nd</sup> Oct</u>. (2<sup>nd</sup> Oct / 2<sup>nd</sup> Dec)</li> <li>6. <u>Republic</u> Day is a national festival. (Republic / Holi)</li> </ol>	
	27.11.20	<p><b>IV. Answer these questions .</b></p> <ol style="list-style-type: none"> <li>1. What are festivals? Ans. <u>Festivals are special days to have fun, meet people and exchange gifts.</u></li> <li>2. Who are neighbours? Ans. <u>People living next to each other are neighbours.</u></li> <li>3. How does a doctor help us? Ans. <u>A doctor helps us by treating us when we fall sick.</u></li> <li>4. Who mends our shoes? Ans. <u>A cobbler mends our shoes.</u></li> </ol>	

Rakshmi

ACADEMIC DIRECTOR