

**KERALA PUBLIC SCHOOLS**  
**ACADEMIC YEAR 2020-21**  
**HOME ASSIGNMENT WITH WEB LINK**  
**DATE: 04.09.20-18.09.20**



**CLASS: U.KG**

SUBJECT	TOPIC	ASSIGNMENT	REFERENCE
ENGLISH	<p><b><u>TOPIC AND DATE</u></b>  <b>CH 3</b>  <b><u>THE IGLOO</u></b>  <b><u>1.9.2020</u></b></p>	<p><b><u>ASSIGNMENTS</u></b></p> <p>Do all the exercises in the English notebook.</p> <p><b><u>Word bank</u></b></p> <p>1.ice  2.idea  3.igloo  4.made  5.outside  6.cold  7.warm  8.very  9.block  10.very</p>	
	<p><b><u>2.9.2020</u></b></p>	<p><b><u>OPPOSITES</u></b></p> <p>1.cold x _____  2.in x _____  3.inside x _____  4.warm x _____</p> <p><b><u>Ans-</u></b>  <b>1.hot 2.out 3.outside 4.cool</b></p>	
	<p><b><u>3.9.2020</u></b></p>	<p><b><u>TRUE OR FALSE</u></b></p> <p>1.Ike made a hut. _____  2.Ike made an igloo. _____  3.Ice is very hot. _____  4.It is cold inside the igloo. _____  5.Igloos are made of bricks. _____</p> <p><b><u>Ans-</u></b>  <b>1.false 2.true 3.false 4.false 5.false</b></p>	
	<p><b><u>4.9.2020</u></b></p>	<p><b><u>FILL IN THE BLANKS</u></b></p> <p>1.Ike had an _____.  2.Ice is very _____.  3.It is icy _____.  4.Igloos are made of blocks of _____.</p> <p><b><u>Ans-</u></b>  <b>1.idea 2.cold 3.outside 4.ice</b></p>	
	<p><b><u>7.9.2020</u></b></p>	<p><b><u>YES/NO</u></b></p> <p>1.Is it warm inside an igloo?  _____.</p> <p>2.Did Ike break his igloo?  _____.</p> <p><b><u>Ans-</u></b>  <b>1.Yes 2.No</b></p>	
	<p><b><u>8.9.2020</u></b></p>	<p><b><u>ANSWER IN A SENTENCE</u></b></p> <p>1.What are igloos made of?  Ans:_____.</p>	

9.9.2020

2. Is it warm inside an igloo?

Ans: \_\_\_\_\_.

3. Who made an igloo?

Ans: \_\_\_\_\_.

**Ans-**

1. What are igloo made of?

Ans- Igloo are made of ice.

2. Is it warm inside an igloo?

Ans- Yes, it is warm inside an igloo.

3. Who made an igloo?

Ans- Ike made an igloo.

**RHYMING WORDS**

1. ice - \_\_\_\_\_, \_\_\_\_\_

2. bold - \_\_\_\_\_, \_\_\_\_\_

3. bid - \_\_\_\_\_, \_\_\_\_\_

4. bit - \_\_\_\_\_, \_\_\_\_\_

5. bin - \_\_\_\_\_, \_\_\_\_\_

6. sip - \_\_\_\_\_, \_\_\_\_\_

7. mix - \_\_\_\_\_, \_\_\_\_\_

**Ans-** 1. mice, dice

2. cold, hold

3. hid, rid

4. sit, pit

5. fin, tin

6. dip, lip

7. fix, six

**FILL IN THE MISSING LETTER ‘I’**

10.9.2020

1. b\_\_b

2. b\_\_n

3. d\_\_p

4. b\_\_t

5. h\_\_d

6. p\_\_n

7. l\_\_p


9. h\_\_t

10. k\_\_d


**THESE/THOSE**

11.9.2020

1.  \_\_\_\_\_ are eggs.

2. \_\_\_\_\_ are ants. 

3.  \_\_\_\_\_ are frogs.

4. \_\_\_\_\_ are apples. 

14.9.2020

5.  \_\_\_\_\_ are. umbrellas.

**Ans-**

1. These 2. Those 3. These

4. Those 5. These

15.9.2020

**MY FRIEND**

The name of my friend is \_\_\_\_\_.

He /She is my classmate.

\_\_\_\_\_ shares his/her toys with me.

He/She is kind to animals.

\_\_\_\_\_ helps me in my studies.

He/She plays with me in every evening.

**NAME THEM**



1. \_\_\_\_\_



2. \_\_\_\_\_



3. \_\_\_\_\_



4. \_\_\_\_\_



5. \_\_\_\_\_

**ANS-**

1.igloo

2.ice

3.inkpot

4.iron

5.India

MATHS

TOPIC AND

DATE

Let Us Compare

1.9.2020

ASSIGNMENTS

Write B for bigger object and S for smaller object.



Write H for heavier and L for lighter objects.



Numerals  
And Names

2.9.2020

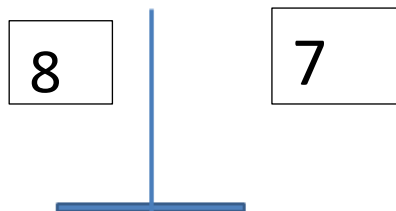

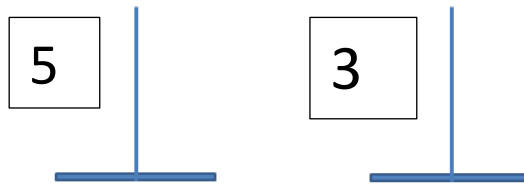
**Counting**  
**Number of Beads**  
**3.9.2020**

Join the numbers to their names.

Numeral	Number Name
6	three
4	eight
8	six
3	four
11	fifteen
19	nineteen
15	twelve
12	eleven

**Before,**  
**After,**  
**between**  
**4.9.2020**

Draw the correct number of beads on the abacus



**Ascending Order**  
**7.9.2020**

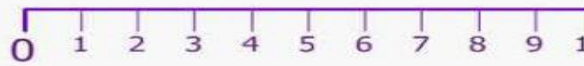
**Decending Order**  
**8.9.2020**



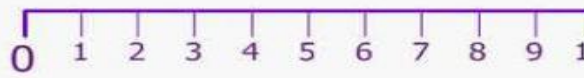
**Count and Write**  
**9.9.2020**

Mark the number.

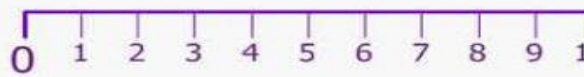
Before 4



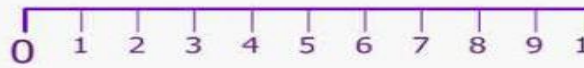
Before 7



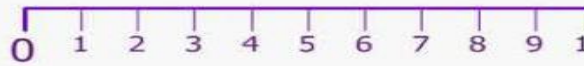
After 9



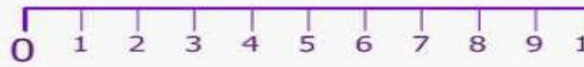
After 5



Between 3 and 5



Between 8 and 10



**10.9.2020**

Write the numbers 1 to 30 in ascending order

1									

Write the numbers 30 to 1 in descending order.

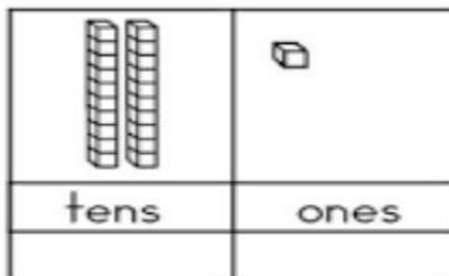
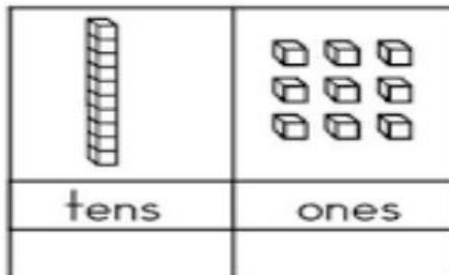
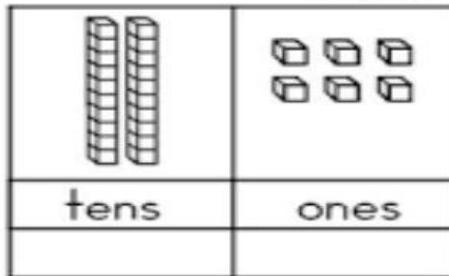
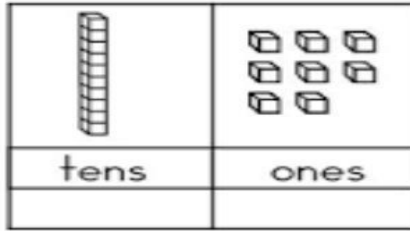
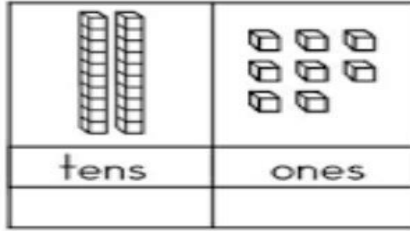
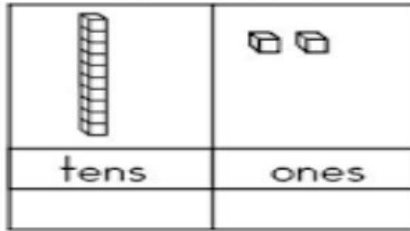
30									

One more than and  
one less than  
11.9.2020

**Addition**  
**14.9.2020**

Count tens and ones and write the number.

15.9.2020



Write how many tens and ones are in the given number.

11 = \_\_\_ tens and \_\_\_ ones

24 = \_\_\_ tens and \_\_\_ ones

38 = \_\_\_ tens and \_\_\_ ones

20 = \_\_\_ tens and \_\_\_ ones

44 = \_\_\_ tens and \_\_\_ ones

39 = \_\_\_ tens and \_\_\_ ones

17 = \_\_\_ tens and \_\_\_ ones

Fill in the blanks with correct number.

$2 \text{ and } 1 \text{ more} = \underline{\quad}$

$5 \text{ and } 1 \text{ more} = \underline{\quad}$

$9 \text{ and } 1 \text{ more} = \underline{\quad}$

$1 \text{ less than } 8 = \underline{\quad}$

$1 \text{ less than } 6 = \underline{\quad}$

$1 \text{ less than } 3 = \underline{\quad}$

Add the numbers.

$2 + 2 = \underline{\quad}$

$1 + 2 = \underline{\quad}$

$2 + 4 = \underline{\quad}$

$3 + 5 = \underline{\quad}$

$4 + 3 = \underline{\quad}$

$5 + 0 = \underline{\quad}$

Add the Following.

$$\begin{array}{r} 4 \\ +3 \\ \hline \end{array}$$

$$\begin{array}{r} 5 \\ +1 \\ \hline \end{array}$$

$$\begin{array}{r} 9 \\ +1 \\ \hline \end{array}$$

$$\begin{array}{r} \square \\ 5 \\ +2 \\ \hline \end{array}$$

$$\begin{array}{r} \square \\ 5 \\ +2 \\ \hline \end{array}$$

$$\begin{array}{r} \square \\ 4 \\ +4 \\ \hline \end{array}$$

$$\begin{array}{r} \square \\ \hline \end{array}$$

$$\begin{array}{r} \square \\ \hline \end{array}$$

$$\begin{array}{r} \square \\ \hline \end{array}$$


## ANSWER KEY

DATE  
1.9.2020


Write B for bigger object and S for smaller object.



2.9.2020




3.9.2020



Write H for heavier and L for lighter objects.

4.9.2020



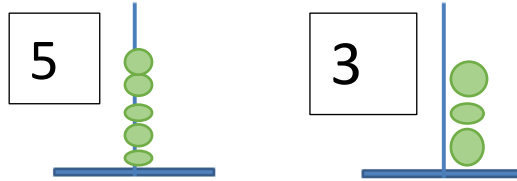
7.9.2020

Join the numbers to their names.

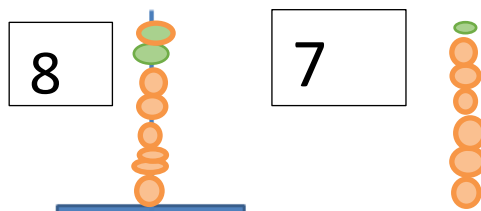
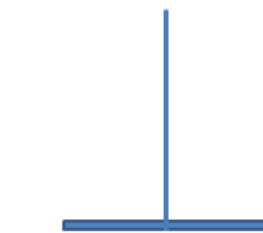
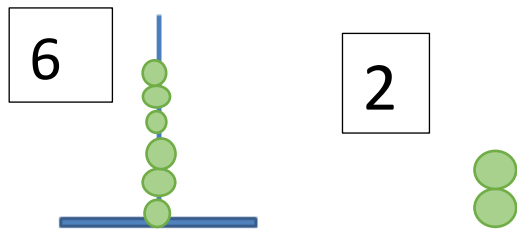
Numeral	Number Name
6	three
4	eight
8	six
3	four
11	fifteen
19	nineteen
15	twelve
12	eleven

Draw the correct number of beads on the abacus

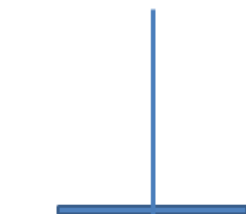
8.9.2020



9.9.2020

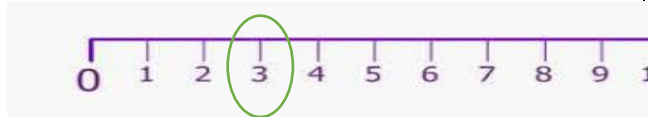


10.9.2020

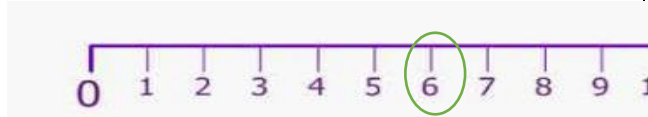


Mark the number.

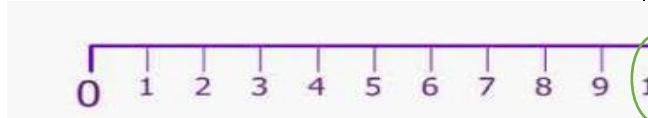
Before 4



Before 7



After 9



11.9.2020

14.9.2020

After 5

15.9.2020



Between 3 and 5



Between 8 and 10





Write the numbers 1 to 30 in ascending order

1	2	3	4	5	6	7	8	9
11	12	13	14	15	16	17	18	19
21	22	23	24	25	26	27	28	29



Write the numbers 30 to 1 in descending order.

30	29	28	27	26	25	24	23	22
20	19	18	17	16	15	14	13	12
10	9	8	7	6	5	4	3	2



Count tens and ones and write the number.

	
tens	ones
<input type="text" value="1"/>	<input type="text" value="2"/>

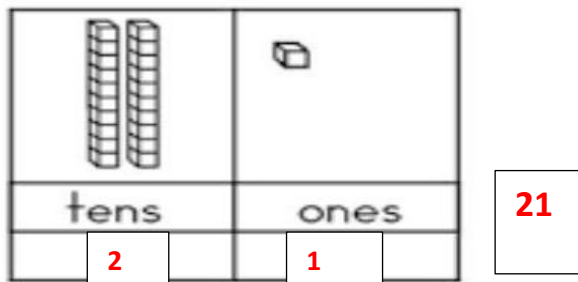
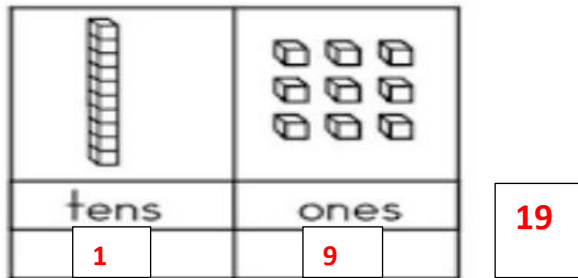
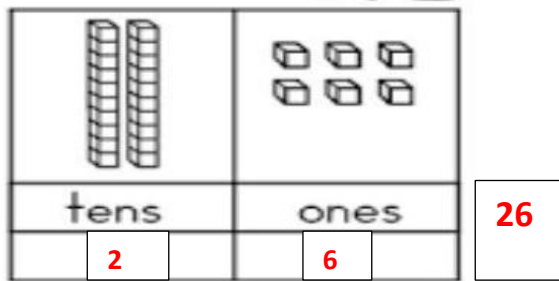
12

	
tens	ones
<input type="text" value="2"/>	<input type="text" value="8"/>

28

	
tens	ones
<input type="text" value="1"/>	<input type="text" value="8"/>

18



Write how many tens and ones are in the given number.

- 11 = **1** tens and **1** ones  
 24 = **2** tens and **4** ones  
 38 = **3** tens and **8** ones  
 20 = **2** tens and **0** ones  
 44 = **4** tens and **4** ones  
 39 = **3** tens and **9** ones  
 17 = **1** tens and **7** ones

Fill in the blanks with correct number.

- 2 and 1 more =   **3**    
 5 and 1 more =   **6**    
 9 and 1 more =   **10**    
 1 less than 8 =   **7**    
 1 less than 6 =   **5**    
 1 less than 3 =   **2**

Add the numbers.

- 2 + 2 =   **4**    
 1 + 2 =   **3**    
 2 + 4 =   **6**    
 3 + 5 =   **8**    
 4 + 3 =   **7**    
 5 + 0 =   **5**

Add the Following.

- |    |    |    |
|----|----|----|
| 4  | 5  | 9  |
| +3 | +1 | +1 |

- |          |          |           |
|----------|----------|-----------|
| <b>7</b> | <b>6</b> | <b>10</b> |
|----------|----------|-----------|

		$\begin{array}{ccc} 3 & 5 & 4 \\ +2 & +2 & +4 \end{array}$	
--	--	--	--

SUBJECT	TOPIC	ASSIGNMENT	REFERNCE
HINDI	ग क फ व ख स ठ च छ  1.9.20	सभी कार्यों को साफ और सुंदर ढंग से अपनी कार्य पुस्तिका में करें।  जोड़कर लिखें। ग + ज = गज क + ल = कल फ + ल = फल व + न = वन ख + त = खत स + च = सच ठ + ग = ठग च + ख = चख छ + त = छत	

2.9.20

खाली जगह भरें

ग प  
क र  
फ न  
व क  
ख त  
स ब  
च ल  
छ ल

3.9.20

पहला अक्षर लिखें



ग




क



व



ख



स

च



छ

4.9.20

वाक्य बनायें

फल – फल चख।  
वन – वन तक चल।  
खत – खत पढ़।  
सच – सच कहं।  
चख – गरम मटर चख।  
छत – छत पर चल।

7.9.20

मिलान करें



फ



क



ख




व

shutterstock.com • 322451131

च



ठ



8.9.20

तुकबंदी शब्द लिखे

ग – पग मग जग  
क – तक् शक ढक  
स – नस रस दस  
च – सच नच रच

9.9.20

जोड़कर लिखें

ग + ग + न = गगन  
क + ल + श = कलश  
फ + ल + क = फलक  
व + त + न = वतन  
स + ड़ + क = सड़क  
च + म + क = चमक  
छ + ल + क = छलक

10.9.20

खाली जगह भरें

ग र ज  
क म ल  
व ज न  
खट म ल  
स फ ल  
चम च म  
छम छ म

11.9.20

चित्रों के नाम लिखें



कमल

		<p>फल</p>  <p>वन</p>  <p>खत</p>  <p>खटमल</p>  <p>सड़क</p> <p>वाक्य बनायें</p> <p>कलश – कलश भर।  कलम – कलम रख।  खबर – खबर पढ़।  खटमल – खटमल मत पकड़।  सड़क – सड़क पर मत चल।</p> <p>समान लय वाले शब्द</p> <p>गगन – मगन लगन  गरम – नरम शरम  चमक – दमक नमक  वतन – पतन रतन  छलक – पलक फलक</p>	
	<p>14.9.20</p> <p>15.9.20</p>		

*Rakshmi*

**DIRECTOR ACADEMICS**