

KERALA PUBLIC SCHOOLS

HOME ASSIGNMENT (7/9/2020 , 14/9/2020/, 21/9/2020, 28/9/2020)



CLASS	SUBJECT	TOPIC / CHAPTER	MODULE / ASSIGNMENT	REFEREN CE LINK
II	ENGLISH LANGUAGE	ADJECTIVES	<p><u>The assignment given below has to be done in the English language notebook.</u></p> <p><u>Please mention REVISION on the top of the notebook along with the dates.</u></p> <p><u>Q. Underline the adjectives in the following sentences:-</u></p> <ol style="list-style-type: none"> 1 . The lion is a strong animal. 2 . Mangal Pandey was a brave soldier. 3 . The ant is a tiny insect. 4 . This book has colourful pictures. 5 . Always drink pure water. 6 . The class was very quite. 7 . Kolkata is a large city. 8 . Fox is a cunning animal. 	https://youtu.be/m_QkDff-Hu8
		7-9-2020		
		14-9-2020	<p><u>Q. Write the opposite adjective:-</u></p> <ol style="list-style-type: none"> 1 . Short _____ 2 . Far _____ 3 . Fast _____ 4 . Poor _____ 5 . Hard _____ 6 . Sad _____ 7 . Dark _____ 8 . Clean _____ 	https://youtu.be/MJwpS0D4MyI
		PRONOUN 21-9-2020	<p><u>Q. Choose the correct word:-</u></p> <ol style="list-style-type: none"> 1 . Where are _____ going this morning. (him / you) 2 . I bought a story book. _____ is very interesting. (It / Them) 3 . Syla and Shalu are going to Mumbai. _____ are good friends. (They , Them) 4 . I have a pet rabbit. _____ is very cute. (It , She) 5 . Raju is a good cricket player. _____ is very tall. (He , It) 	

		<p>COMPREHEN SION 28-9-2020</p>	<p>Read the short passage and answer the questions:-</p> <p>Siya's class went to the school carnival today. It was a lot of fun. Siya won two prizes. She won a blue balloon and a toy car. She had a great time with all of her friends. First , she played a few games. Then , she got popcorn and lemonade with her friends . Finally , she got to watch a magic show. Siya cant wait to get home and tell her parents all about her fun day!</p> <p>Write the opposites:-</p> <ol style="list-style-type: none"> 1 . friend* 2 . few* 3 . won* <p>Answer the following questions:-</p> <ol style="list-style-type: none"> 1 . Where did Siya's class go? 2 . What did Siya win? 3 . What did she do first? 4 . What did Siya eat at the carnival? <p>Make sentences:-</p> <ol style="list-style-type: none"> 1. School- 2. Balloon- 	
		<p>7-9-2020</p> <p>14-9-2020</p> <p>21-9-2020</p>	<p><u>ANSWER KEY:-</u></p> <p><u>Underline the adjectives in the following sentences:-</u></p> <ol style="list-style-type: none"> 1 . Lion is a strong animal. 2 . Mangal Pandey was a brave soldier. 3 . The ant is a tiny insect. 4 . This book has colourful pictures. 5 . Always drink pure water. 6 . The class was very quite. 7 . Kolkata is a large city. 8 . Fox is a cunning animal. <p><u>Write the opposite adjectives:-</u></p> <ol style="list-style-type: none"> 1 . Short - Tall 2 . Far – Near 3 . Fast – Slow 4 . Poor – Rich 5 . Hard – Soft 	

		28-9-2020	<p>6 . Sad – Happy 7 . Dark – Light 8 . Clean – Dirty</p> <p><u>Choose the correct words:-</u></p> <p>1 . When are you going this morning. (him / you) 2 . I bought a story book. It is very interesting. (It / Them) 3 . Syla and Shalu are going to Mumbai. They are good friends. (They / Them) 4 . I have a pet rabbit. It is very cute. (It / He) 5 . Raju is a good cricket player. He is very tall. (It / He)</p> <p><u>Write the opposites:-</u></p> <p>1 . Friend* Enemy 2 . Few* Wrong 3 . Won* Lose</p> <p><u>Answer the following questions:-</u></p> <p>1 . Where did siya’s class go? Ans) Siya’s class went to the school carnival.</p> <p>2 . What did Siya win? Ans) Siya won a blue balloon and a toy car.</p> <p>3.What did she do first? Ans) She played a few games first.</p> <p>4.What did Siya eat at the carnival? Ans) Siya ate popcorn and lemonade at the carnival</p> <p><u>Make sentences:-</u></p> <p>1. School – Ram goes to school by bicycle. 2. Balloon – My father bought a big gas balloon for me from the fair.</p>	
--	--	-----------	--	--

KERALA PUBLIC SCHOOLS

HOME ASSIGNMENTS

(Answer key)

SUBJECT	DATES	ASSIGNMENTS	REFERENCE LINKS
HINDI LANG	4.09.20	<p><u>अनुच्छेद लेखन</u></p> <p><u>मेरी माँ</u></p> <p>मेरी माँ का नाम श्रीमती है । वह एक कुशल गृहिणी / हैं । उनकी आयु लगभग वर्ष है ।</p> <p>वे प्रतीदिन सुबह घर में सबसे पहले उठ जाती हैं । घर के सब लोगों का ध्यान मेरी माँ ही रखती हैं । मैं अपनी माँ को भगवान के समान समझती / समझता हूँ और उनकी हर बात मानती / मानता हूँ । मेरी माँ मेरी सबसे अच्छी दोस्त हैं । वह मुझे पढ़ाई में सहायता करने के साथ-साथ मेरे साथ खेल भी खेलती हैं । वह हमेशा मुझे सच के रास्ते पर चलने की सीख देती हैं और समय का महत्व बताती हैं । माँ ईश्वर के द्वारा दिया गया एक वरदान है । मैं अपनी माँ को बहुत प्यार करती / करता हूँ और मेरी माँ भी मुझे बहुत प्यार करती है ।</p> <p><u>लिंग</u></p> <p><u>I.दिए गए पुलिलिंग शब्दों के स्त्रीलिंग</u></p> <p><u>रूप लिखें:-</u></p> <p>सेठ माली चींटा शेर मोर</p>	

	11.08.20	<p><u>उत्तर</u> सेठानी मालिन चींटी शेरनी मोरनी</p> <p><u>II. पुल्लिंग एवं स्त्रीलिंग शब्द छाँटकर लिखें :-</u> नानी , धोबी , बैल , हिरनी , बकरा, बाघिन , मोर , रानी</p> <table border="0"> <tr> <td><u>पुल्लिंग</u></td> <td><u>स्त्रीलिंग</u></td> </tr> <tr> <td>धोबी</td> <td>नानी</td> </tr> <tr> <td>बैल</td> <td>हिरनी</td> </tr> <tr> <td>बकरा</td> <td>बाघिन</td> </tr> <tr> <td>मोर</td> <td>रानी</td> </tr> </table> <p><u>विशेषण</u></p> <p><u>I. विशेषण शब्दों को रेखांकित करें :-</u></p> <ol style="list-style-type: none"> मोटा आदमी । लाल गुलाब । तीन किताबें । गरम चाय । प्यारी चिड़िया । <p><u>उत्तर</u> मोटा लाल तीन गरम प्यारी</p> <p><u>II. निम्नलिखित वाक्यों में से विशेषण</u></p>	<u>पुल्लिंग</u>	<u>स्त्रीलिंग</u>	धोबी	नानी	बैल	हिरनी	बकरा	बाघिन	मोर	रानी	
<u>पुल्लिंग</u>	<u>स्त्रीलिंग</u>												
धोबी	नानी												
बैल	हिरनी												
बकरा	बाघिन												
मोर	रानी												

	18.09.20	<p>शब्द छाँटकर लिखें :-</p> <ol style="list-style-type: none"> 1. कोयल काली है । 2. कमल के फूल सुंदर है । 3. भवन बड़ा है । 4. दो बच्चे हँस रहे हैं । 5. यह हरा वृक्ष है । <p>उत्तर</p> <p>काली</p> <p>सुंदर</p> <p>बड़ा</p> <p>दो</p> <p>हरा</p>	
	25.09.20	<p>अनुच्छेद लेखन :-</p> <p>मेरा विद्यालय</p> <p>मैं दूसरी कक्षा की छात्रा / का छात्र</p> <p>हूँ । मेरे विद्यालय का नाम केरला पब्लिक स्कूल है । मेरा विद्यालय जमशेदपुर के में स्थित</p> <p>है । इसका विशाल भवन दो खंडों में</p> <p>विभक्त है । मेरे विद्यालय में खेलकूद के लिए एक मैदान एवं रंगमंच भी है । मेरे विद्यालय में अनुभवी , विद्वान एवं परिश्रमी शिक्षकगण हैं । मेरे विद्यालय में सभी विषयों की पढ़ाई होती है । हमारी प्रधानाचार्या बहुत ही गुणी एवं अनुशासनप्रिय महिला हैं। विद्यार्थियों के साथ उनका व्यवहार बहुत ही मधुर है और समय समय पर वे विद्यार्थियों का मार्गदर्शन भी करती हैं । मैं प्रतीदिन विद्यालय जाती / जाता हूँ । विद्यालय जाना मुझे बहुत अच्छा लगता है और मुझे अपने विद्यालय पर गर्व है ।</p>	

KERALA PUBLIC SCHOOLS

HOME ASSIGNMENT

CLASS	SUBJECT	TOPIC/ CHAPTER	MODULE / ASSIGNMENT	REFERENCE LINK
<u>02/09/20 TO 08/09/2</u>				
II	Maths	Measurement	<p>Solve the following in the maths note book. Draw margins , mention date , exercise number.</p> <p>Write m for things which are more than a meter and cm for things which are more than a centimeters.</p> <p align="center">Q1. a , b , c , d , e , f , Pg no – 159</p> <p>Using the ruler drawn, find the length of the given objects.</p> <p align="center">Q2. a , b , c , d Pg no – 159 , 160</p> <p>Fill in the boxes.</p> <p align="center">Q3. a , b , c , d , e , f , Pg no – 160</p> <p>Solve the following</p> <p align="center">Q4. a , c , d , f Pg no - 161</p> <p>Write g for objects that are more than a gram and kg for objects that are more than a kilogram <input type="checkbox"/></p> <p align="center">Q5. a , b , c Pg no – 163</p> <p>Look at the weight of the objects, then put > or < in the box.</p> <p align="center">Q6. a , b Pg no – 164</p>	https://youtu.be/E0T4geT9WH4
ANSWER KEY				
		Measurement t 02/08/20 to 08/09/20	<p>Q1. cm b. cm c. m d. m e. m f. cm</p>	

Q2.

7cm b. 2cm c. 5cm d. 2cm

Q3.

700cm b. 3m c. 8m d. 500cm e. 1200cm f. 9m

Q4. Solve the following

m	cm	a.
83	10	
62	30	+
145	40	

m	cm	c.
121	15	
39	78	+
160	93	

m	cm	f.
347	92	
103	30	-
244	62	

m	cm	d.
58	95	
24	32	-
34	63	

Q5.

a. g b. kg c. kg

Q6.

< b. >

09/09/20 to 15/09/20

Solve these.

Q7. a , c , d , f Pg no – 165

Choose the correct option.

Q8. a , b , c Pg no - 165

Tick the container that has more capacity.

Q9. a , b , Pg no – 166,167

Read the scale carefully and write how much water is there in each jar.

Q10. a , b , c Pg no – 167

Solve these.

Q11. a , b , d , e Pg no – 168

ANSWER KEY

Q7. Solve these

kg	g	
3	530	a.
5	265	+
8	795	
kg	g	c.
85	838	+
21	325	
107	163	

kg	g	D
6	836	-
3	542	
3	294	

kg	g	f.
73	195	-
28	073	
45	122	

Q8.

a. (iii) b. (i) c. (ii)

Q9.

a. 500 ml b. 2 l

Q10.

a. 200 ml b. 350 ml c. 500 ml

Q11.

l	ml
4	615
2	250
6	865

a.

+

l	ml
75	270
83	320
158	590

b.

+

l	ml
6	740
4	275
2	465

d.

-

l	ml
98	630
65	487
33	143

e.

16/09/20 to 22/09/20

How much do you know?

Q1. a, b, c, d, e, f

Q2. a, b, c, d, e, f, g, Pg no – 169

Solve these.

Q3. a , b , c , Pg no – 170

Pg – 170 (Do it in the book only)

Pg – 171 (Do it in the book only)

Pg – 172 (Do it in the book only)

ANSWER KEY

Q12. 1. How will you measure the following?

a. g b. ml c. cm d. cm e. g f. cm

2. Fill in the blanks.

a. m , cm

b. kg

c. 1kg

d. l and ml

e. 38 kg

f. 55 kg

g. 4ml

Q13.

m	cm	a.
203	45	+
96	88	
300	33	

			<table border="1"> <tr> <td>kg</td> <td>g</td> </tr> <tr> <td>405</td> <td>324</td> </tr> <tr> <td>219</td> <td>109</td> </tr> <tr> <td>186</td> <td>215</td> </tr> </table> +	kg	g	405	324	219	109	186	215	<p>b.</p> <p>-</p> <table border="1"> <tr> <td>l</td> <td>ml</td> </tr> <tr> <td>158</td> <td>203</td> </tr> <tr> <td>729</td> <td>953</td> </tr> <tr> <td>888</td> <td>156</td> </tr> </table> <p>c.</p>	l	ml	158	203	729	953	888	156	
kg	g																				
405	324																				
219	109																				
186	215																				
l	ml																				
158	203																				
729	953																				
888	156																				


20/09/20 to 30/09/20

		<p>Ch – 6</p> <p>Patterns</p>	<p>Colour and complete the pattern</p> <p>Q1 Pg no – 173</p> <p>7</p> <p>Fill in the missing numbers in the number train given below</p> <p>Q2 Pg no – 173</p> <p>Complete the pattern of shapes</p> <p>Q1 – a , b , c d</p> <p>Q2 – a , b , c , d Pg no – 173 , 174</p> <p>Complete the number patterns. Also write the rule in the big box</p> <p>Q4 – a , b , c , d Pg no – 175</p> <p>Complete the letter pattern</p> <p>Q5 – a , b , c , d Pg no – 175</p> <p>Complete the figures to match the given figure and colour them.</p>	<p>https://youtu.be/wfAyddSr9_w</p>
--	--	---	---	--

ANSWER KEY

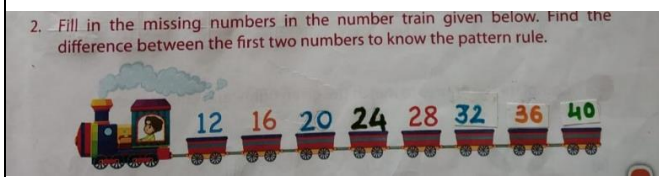
QI.

1. Colour and complete the pattern.



QII.


2. Fill in the missing numbers in the number train given below. Find the difference between the first two numbers to know the pattern rule.



QIII.


1.

1 Complete the pattern of shapes.



2.

2 Complete the patterns.



QIV.

32 , 36 , 40 the rule is to add 4

78 , 73 , 68 the rule is to subtract 5

500 , 400 , 300 the rule is to subtract 100

145 , 155 , 165 the rule is to add 10

QV.

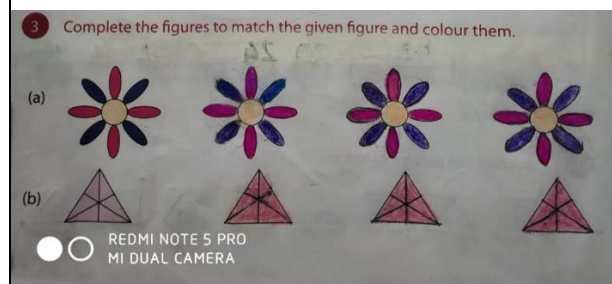
P , S , V , Y

M , P , R , U

GhH , IjJ , KIL , MnN

EEF , GGH , IIJ , KKL

QVI.



Rakshmi

DIRECTOR ACADEMICS