

KERALA PUBLIC SCHOOLS


ACADEMIC YEAR 2020-2021

HOME ASSIGNMENT WITH WEB LINK



CLASS : U.KG

DATE : 06.07.2020-17.07.2020

| SUBJECT | TOPIC | ASSIGNMENT | REFERENCE LINKS | | | | | | | | | | | | | | | | | | | | | | | | | | | | | | | | | | | | | | | | | | | | | | | | | | | | | | | | | | | | | | | | | | | | | | | | | | | | | | | | |
|-----------------------|---|--|-----------------------|----|----|----|----|----|----|--|--|--|---|---|---|---|---|---|---|---|---|----|----|----|----|----|----|----|----|----|----|----|----|----|----|----|----|----|----|----|----|----|----|----|----|----|----|----|----|----|----|----|----|----|----|----|----|----|----|----|----|----|---|--|---|--|---|--|---|--|---|--|----|--|----|--|----|--|----|--|----|--|--|
| MATHS | <p>Skip Counting of 2's 06.07.2020</p> <p>07.07.2020</p> <p>08.07.2020</p> | <p>What do you mean by Skip Counting? Skip Counting means the method of counting forward by numbers other than one. To skip count, we keep adding the same number each time to the previous number. Read aloud. Please do this activity in the maths note-book.</p> <table border="1" data-bbox="459 887 1062 1081"> <tr> <th colspan="10">Skip counting by twos</th> </tr> <tr> <td>1</td><td>2</td><td>3</td><td>4</td><td>5</td><td>6</td><td>7</td><td>8</td><td>9</td><td>10</td> </tr> <tr> <td>11</td><td>12</td><td>13</td><td>14</td><td>15</td><td>16</td><td>17</td><td>18</td><td>19</td><td>20</td> </tr> </table> <p>Skip counting by 2's</p> <table border="1" data-bbox="459 1155 1046 1328"> <tr> <td>21</td><td>22</td><td>23</td><td>24</td><td>25</td><td>26</td><td>27</td><td>28</td><td>29</td><td>30</td> </tr> <tr> <td>31</td><td>32</td><td>33</td><td>34</td><td>35</td><td>36</td><td>37</td><td>38</td><td>39</td><td>40</td> </tr> <tr> <td>41</td><td>42</td><td>43</td><td>44</td><td>45</td><td>46</td><td>47</td><td>48</td><td>49</td><td>50</td> </tr> </table> <p>Fill in the missing numbers of count by 2's</p> <p>Counting by 2s</p>  <p>Fill in the missing numbers to count by 2s.</p> <table border="1" data-bbox="520 1552 1007 1872"> <tr> <td>1</td><td></td><td>3</td><td></td><td>5</td> </tr> <tr> <td></td><td>7</td><td></td><td>9</td><td></td> </tr> <tr> <td>11</td><td></td><td>13</td><td></td><td>15</td> </tr> <tr> <td></td><td>17</td><td></td><td>19</td><td></td> </tr> </table> | Skip counting by twos | | | | | | | | | | 1 | 2 | 3 | 4 | 5 | 6 | 7 | 8 | 9 | 10 | 11 | 12 | 13 | 14 | 15 | 16 | 17 | 18 | 19 | 20 | 21 | 22 | 23 | 24 | 25 | 26 | 27 | 28 | 29 | 30 | 31 | 32 | 33 | 34 | 35 | 36 | 37 | 38 | 39 | 40 | 41 | 42 | 43 | 44 | 45 | 46 | 47 | 48 | 49 | 50 | 1 | | 3 | | 5 | | 7 | | 9 | | 11 | | 13 | | 15 | | 17 | | 19 | | <p>https://youtu.be/hq8vlZB-h9A</p> |
| Skip counting by twos | | | | | | | | | | | | | | | | | | | | | | | | | | | | | | | | | | | | | | | | | | | | | | | | | | | | | | | | | | | | | | | | | | | | | | | | | | | | | | | | | | | |
| 1 | 2 | 3 | 4 | 5 | 6 | 7 | 8 | 9 | 10 | | | | | | | | | | | | | | | | | | | | | | | | | | | | | | | | | | | | | | | | | | | | | | | | | | | | | | | | | | | | | | | | | | | | | | | | | | |
| 11 | 12 | 13 | 14 | 15 | 16 | 17 | 18 | 19 | 20 | | | | | | | | | | | | | | | | | | | | | | | | | | | | | | | | | | | | | | | | | | | | | | | | | | | | | | | | | | | | | | | | | | | | | | | | | | |
| 21 | 22 | 23 | 24 | 25 | 26 | 27 | 28 | 29 | 30 | | | | | | | | | | | | | | | | | | | | | | | | | | | | | | | | | | | | | | | | | | | | | | | | | | | | | | | | | | | | | | | | | | | | | | | | | | |
| 31 | 32 | 33 | 34 | 35 | 36 | 37 | 38 | 39 | 40 | | | | | | | | | | | | | | | | | | | | | | | | | | | | | | | | | | | | | | | | | | | | | | | | | | | | | | | | | | | | | | | | | | | | | | | | | | |
| 41 | 42 | 43 | 44 | 45 | 46 | 47 | 48 | 49 | 50 | | | | | | | | | | | | | | | | | | | | | | | | | | | | | | | | | | | | | | | | | | | | | | | | | | | | | | | | | | | | | | | | | | | | | | | | | | |
| 1 | | 3 | | 5 | | | | | | | | | | | | | | | | | | | | | | | | | | | | | | | | | | | | | | | | | | | | | | | | | | | | | | | | | | | | | | | | | | | | | | | | | | | | | | | |
| | 7 | | 9 | | | | | | | | | | | | | | | | | | | | | | | | | | | | | | | | | | | | | | | | | | | | | | | | | | | | | | | | | | | | | | | | | | | | | | | | | | | | | | | | |
| 11 | | 13 | | 15 | | | | | | | | | | | | | | | | | | | | | | | | | | | | | | | | | | | | | | | | | | | | | | | | | | | | | | | | | | | | | | | | | | | | | | | | | | | | | | | |
| | 17 | | 19 | | | | | | | | | | | | | | | | | | | | | | | | | | | | | | | | | | | | | | | | | | | | | | | | | | | | | | | | | | | | | | | | | | | | | | | | | | | | | | | | |

09.07.2020

Fill in the blanks (Skip counting of 2's)

| | | | | | | | | |
|---|--|--|---|--|--|--|----|--|
| 2 | | | 8 | | | | 18 | |
|---|--|--|---|--|--|--|----|--|

| | | | | | | | | |
|--|----|--|--|----|--|--|--|----|
| | 24 | | | 30 | | | | 40 |
|--|----|--|--|----|--|--|--|----|

| | | | | | | |
|--|--|--|----|--|--|--|
| | | | 46 | | | |
|--|--|--|----|--|--|--|

10.07.2020



a.

| | | | | | | | |
|--|---|--|--|----|--|--|----|
| | 4 | | | 10 | | | 16 |
|--|---|--|--|----|--|--|----|

b.

| | | | | | | | |
|----|--|--|--|--|----|--|--|
| 22 | | | | | 32 | | |
|----|--|--|--|--|----|--|--|

c.

| | | | | | | | |
|--|--|----|--|--|--|----|--|
| | | 40 | | | | 48 | |
|--|--|----|--|--|--|----|--|

13.07.2020

Read aloud
Please do this activity in the notebook
Skip Counting by 3's

https://youtu.be/0_Cr3AQRF1c

| | | | | | | | | | |
|----|----|----|----|----|----|----|----|----|----|
| 1 | 2 | 3 | 4 | 5 | 6 | 7 | 8 | 9 | 10 |
| 11 | 12 | 13 | 14 | 15 | 16 | 17 | 18 | 19 | 20 |

14.07.2020

| | | | | | | | | | |
|----|----|----|----|----|----|----|----|----|----|
| 21 | 22 | 23 | 24 | 25 | 26 | 27 | 28 | 29 | 30 |
| 31 | 32 | 33 | 34 | 35 | 36 | 37 | 38 | 39 | 40 |
| 41 | 42 | 43 | 44 | 45 | 46 | 47 | 48 | 49 | 50 |

15.07.2020

16.07.2020

Count By 3's!

3

27

39

60

17.07.2020

Skip Counting by 3

Fill in the Blank with the missing number. Remember, you are counting by 3.

0 3 6 9 15

18 24 30 33

 39 42 45 48

Answer Key

Fill in the missing numbers of count by 2's

Counting by 2s




Fill in the missing numbers to count by 2s.

| | | | | |
|----|----|----|----|----|
| 1 | 2 | 3 | 4 | 5 |
| 6 | 7 | 8 | 9 | 10 |
| 11 | 12 | 13 | 14 | 15 |
| 16 | 17 | 18 | 19 | 20 |

Fill in the blanks (Skip Counting by 2's)

| | | | | | | | | | |
|---|---|---|---|----|----|----|----|----|----|
| 2 | 4 | 6 | 8 | 10 | 12 | 14 | 16 | 18 | 20 |
|---|---|---|---|----|----|----|----|----|----|

| | | | | | | | | | |
|----|----|----|----|----|----|----|----|----|----|
| 22 | 24 | 26 | 28 | 30 | 32 | 34 | 36 | 38 | 40 |
|----|----|----|----|----|----|----|----|----|----|



SPRINGTIME Skip Counting



Directions: Fill in the correct number when skip counting by 2's

| | | | | | | | |
|---|---|---|---|----|----|----|----|
| 2 | 4 | 6 | 8 | 10 | 12 | 14 | 16 |
|---|---|---|---|----|----|----|----|

| | | | | | | | |
|----|----|----|----|----|----|----|----|
| 22 | 24 | 26 | 28 | 30 | 32 | 34 | 36 |
|----|----|----|----|----|----|----|----|

| | | | | | | | |
|----|----|----|----|----|----|----|----|
| 36 | 38 | 40 | 42 | 44 | 46 | 48 | 50 |
|----|----|----|----|----|----|----|----|





| | | | | |
|----|----|----|----|----|
| 42 | 44 | 46 | 48 | 50 |
|----|----|----|----|----|





| | |
|---|---|
| 6 | 8 |
|---|---|





| | |
|----|----|
| 12 | 14 |
|----|----|

Count By 3's!

| | | | | |
|---|--|--|--|--|
| 3 | | | | |
|---|--|--|--|--|

| | | | | |
|---|---|---|----|---|
|  |  |  | 27 |  |
|---|---|---|----|---|

| | | | | |
|---|---|----|---|---|
|  |  | 39 |  |  |
|---|---|----|---|---|

| | | | | |
|---|---|---|---|----|
|  |  |  |  | 60 |
|---|---|---|---|----|

18

33

48

Skip Counting by 3

Fill in the blank with the missing number. Remember, you are counting by 3.

| | | | | | |
|-------------|-------------|----|-------------|-------------|-------------|
| 0 | 3 | 6 | 9 | <u> </u> | 15 |
| | | | | | |
| 18 | <u> </u> | 24 | <u> </u> | 30 | 33 |
| | | | | | |
| <u> </u> | 39 | 42 | 45 | 48 | <u> </u> |
| | | | | | |

50

KERALA PUBLIC SCHOOLS
ACADEMIC YEAR 2020-21
HOME ASSIGNMENT WITH WEB LINK

CLASS : UKG
DATE : 06.07.20 – 17.07.20



| SUBJECT | CHAPTERS | ASSIGNMENT | REFERENC ES |
|---------|-----------------|---|---|
| Eng. | Ch-6: The Birds | <p><u>Do all the work in your English Book and also in your Notebook</u></p> <p>1.) <u>Draw or stick picture of these birds:-</u>in one page.</p> <ul style="list-style-type: none">❖ A bird on a branch❖ A bird in the nest❖ Black bird❖ Brown bird❖ Blue bird <p>2.) <u>Word Bank</u> (write each words 3 times by drawing 3 columns)</p> <p>Bob; small; birds; branch; nest ; black; brown; blue; berries; bread; butter; bananas; batman</p> <p>3.) <u>Opposites:</u> (Pg no.64)</p> <ul style="list-style-type: none">• big x small• in x out• like x dislike• cold x hot• old x young <p>4.)<u>Write True or False:</u> (Pg no.65)</p> <p>1.Bob is a girl. _____</p> <p>2.Bob likes bread and jam. _____</p> <p>3.Bob likes black birds. _____</p> <p>4.Bob does not like a banana. _____</p> <p>5.Bob does not like birds. _____</p> <p>Answers: 1.False 2.False 3.True 4.False 5.False</p> <p>5.) <u>Fill in the blanks:</u> (Pg no. 65)</p> <p>1.Bob likes _____. (bees /birds)</p> <p>2. Bob likes a bird on a _____.(ball / branch)</p> <p>3.Bob likes baby birds in the _____.(branch / nest)</p> <p>4. Bob likes bread and</p> | <p><u>Copy and paste the links given</u></p> |
| | 06.07.20 | | |
| | 07.07.20 | | |
| | 08.07.20 | | |
| | 09.07.20 | | |

| | | | |
|--|---------------------------|--|--|
| | 10.07.20 | <p>_____.(jam / butter)</p> <p>5. Bob is a _____ boy. (bad / good)</p> <p>Answers: 1.birds 2.branch 3.nest 4.butter 5.good</p> <p>6.) Answer the following:- (Pg no.66)</p> <p>1. What does Bob like? Ans: _____ —</p> <p>2. Does Bob like blue birds best? Ans: _____</p> <p>3. Does Bob like red birds best? Ans: _____</p> <p>4. Which bird do you like the best? Ans: _____</p> <p>Answers: 1. Bob likes birds. 2. Yes, Bob likes blue birds best. 3. No, Bob does not like red birds. 4. I like green birds the best.</p> <p>7.) Make Sentences: (Pg no. 66) 1.good : 2. like:</p> <p>Answers: 1. good : Seema is a <u>good</u> girl. 2. like: Mohan and Rita <u>like</u> to play in the park.</p> <p><u>Do all the work in your English Book and also in your Notebook</u></p> <p><u>Revision Worksheet - 1</u></p> <p>1. Write the opposites of:-</p> <ol style="list-style-type: none"> 1. over x 2. small x 3. old x 4. one x <p>2. Write True or False:</p> <p>1. Otis had big hooves. _____</p> | |
| | 13.07.20 & 14.07.20 | | |

15.07.20
&
16.07.20

- 2.Otis was a young ox. _____
3.Otis had black and white fur.

4.Otis walked over the hills.

3. Answer in one word:

- 1.How many tails did Otis have?

2.What did Otis have on his head?

4. Fill in the blanks:

- 1.Otis only ate _____. (grass / plants)
2.Otis slept _____ the moon. (under / over)
3.Otis had orange and brown _____. (hair / fur)
4.Otis had _____ on his head. (horns / hooves)
5.Otis walked over the _____. (meadows / hills)

5. Answer in one sentence:

1. Where did Otis walk?
Ans: _____
2. Who was Otis?
Ans: _____

6. Make Sentences:

1. young: _____
2. moon: _____

Fill in the blanks with This.



1. _____ is a dog.



2. _____ is a fan.








3. _____ is a book.

Fill in the blanks with That.

1. _____ is a box.

17.07.20

| | | | |
|---------------------|--|--|--|
| | | <div data-bbox="842 58 1015 143" data-label="Image"> </div> <p>2. _____ is a girl.</p> <div data-bbox="849 197 960 309" data-label="Image"> </div> <p>3. _____ a candy.</p> <div data-bbox="839 353 970 452" data-label="Image"> </div> <p><u>Fill in the blanks with This / That.</u></p> <p>1.  _____ is a carpet.</p> <p>2. _____ is a glass.</p> <div data-bbox="839 801 960 922" data-label="Image"> </div> <p>3.  _____ is a toy car.</p> <p>4.  _____ is a gate.</p> <p>5. _____ is a cat. </p> | |
| <p>Hindi</p> | <p>6.7.2020-7.7.2020 ध</p> <div data-bbox="344 1478 689 1733" data-label="Image"> </div> <p>8.7.20-9.7.20 थ</p> <div data-bbox="389 1890 513 2087" data-label="Image"> </div> <p>10.7.20-13.7.20 श</p> | <p>ध लिखने का अभ्यास अपनी कापी में करें तथा ध से संबंधित पाँच चित्रों के नाम बोले।</p> <p>थ लिखने का अभ्यास अपनी कापी में करें तथा थ से संबंधित पाँच चित्रों के नाम बोले।</p> <p>श लिखने का अभ्यास अपने कापी में करें तथा श से संबंधित चित्रों के नाम बोले।</p> <p>अभ्यास अपने कापी में करें।</p> | |

| | | | |
|--|--|--|--|
| |  <p>14.7.20-15.7.20 अभ्यास कार्य</p> <p>16.7.20 17.7.20 अभ्यास कार्य</p> | <p>जोड़कर लिखें थ+र+म+स =थरमस श+र+ब+त=शरबत ह+व+न=हवन न+ह+र=नहर स+फ+ल=सफल</p> <p>अभ्यास अपने कापी में करें समान लय वाले शब्द हवन=भवन ,गमन नमक=चमक ,दमक धन=मन,फन मगर=डगर ,नगर सड़क=धडक ,कडक</p> | |
| <p>GENERAL AWARENE SS</p> | <p>6.07.20- 10. 07.20 13. 07.20- 17.07.20</p> | <p>Read the chapter and spellings everyday CHAPTER :22 – At the Doctor’s Clinic CHAPTER:1 –My Family</p> | |

Rakshmi

DIRECTOR ACADEMICS