

KERALA PUBLIC SCHOOLS.

ACADEMIC YEAR 2020-21



CLASS : I

HOME ASSIGNMENT WITH WEB LINK

DATE : 1.05.2020 – 9.05.2020









SUB	CHAPTER	ASSIGNMENT	WEB LINK
Math s	CH:3 Subtraction	Do the following exercises in the text book:	Go through all the links given below:
	1.05.2020	Pg no. 102 and 103	https://youtu.be/eM_YiOiN77U
	2.05.2020	Pg no.104 and 105	https://youtu.be/DCvVICXeUNQ
	4.05.2020	Pg no. 106 and 107	https://youtu.be/pwQKugrFmJQ
	5.05.2020	Pg.no. 108 Word problems	
	6.05.2020	Pg.no. 109	
	7.05.2020	Pg no 110	https://youtu.be/CNpJWC52yrk
	8.05.2020	Solve the following in the maths notebook. Draw margins, mention date . Subtract the numbers :- 1) $\begin{array}{r} 7 \\ - 5 \\ \hline \hline \end{array}$ 2) $\begin{array}{r} 8 \\ - 2 \\ \hline \hline \end{array}$ 3) $\begin{array}{r} 6 \\ - 4 \\ \hline \hline \end{array}$ 4) $\begin{array}{r} 9 \\ - 0 \\ \hline \hline \end{array}$ 5) $\begin{array}{r} 6 \\ - 1 \\ \hline \hline \end{array}$ 6) $\begin{array}{r} 5 \\ - 5 \\ \hline \hline \end{array}$	Pschool.in https://youtu.be/9Z2gpbYiEXo

9.05.2020

Project work to be done in the notebook
as shown in the picture and colour the
correct answer:-

Astronaut Subtraction

Let's do the following math operations.

	-		=	(1) (5)
				(4) (3)
	-		=	(5) (4)
				(2) (3)
	-		=	(2) (4)
				(5) (0)
	-		=	(3) (1)
				(6) (2)

Rakshmi

DIRECTOR ACADEMICS